



**JEE
MAIN
FEB.
2021**

**25th Feb. 2021 | Shift - 2
MATHEMATICS**

JEE | NEET | Foundation

MOTION™

25000+
SELECTIONS SINCE 2007

SECTION-A

1. A plane passes through the points $A(1, 2, 3)$, $B(2, 3, 1)$ and $C(2, 4, 2)$. If O is the origin and P is $(2, -1, 1)$, then the projection of \overline{OP} on this plane is of length:

(1) $\sqrt{\frac{2}{5}}$

(2) $\sqrt{\frac{2}{3}}$

(3) $\sqrt{\frac{2}{11}}$

(4) $\sqrt{\frac{2}{7}}$

Ans. (3)

Sol. $A(1, 2, 3)$, $B(2, 3, 1)$, $C(2, 4, 2)$, $O(0, 0, 0)$

Equation of plane passing through A, B, C will be

$$\begin{vmatrix} x-1 & y-2 & z-3 \\ 2-1 & 3-2 & 1-3 \\ 2-1 & 4-2 & 2-3 \end{vmatrix} = 0$$

$$\Rightarrow \begin{vmatrix} x-1 & y-2 & z-3 \\ 1 & 1 & -2 \\ 1 & 2 & -1 \end{vmatrix} = 0$$

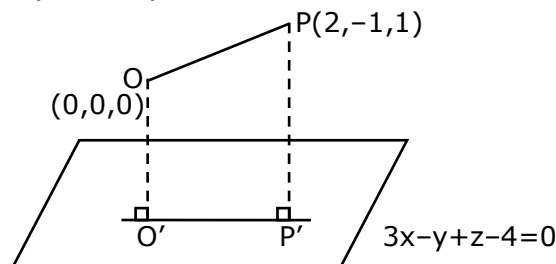
$$\Rightarrow (x-1)(-1+4) - (y-2)(-1+2) + (z-3)(2-1) = 0$$

$$\Rightarrow (x-1)(3) - (y-2)(1) + (z-3)(1) = 0$$

$$\Rightarrow 3x - 3 - y + 2 + z - 3 = 0$$

$$\Rightarrow 3x - y + z - 4 = 0, \text{ is the required plane.}$$

Now, given $O(0, 0, 0)$ & $P(2, -1, 1)$



Plane is $3x - y + z - 4 = 0$

O' & P' are foot of perpendiculars.

Toll Free : 1800-212-1799

www.motion.ac.in | Email : info@motion.ac.in

for O'

$$\frac{x-0}{3} = \frac{y-0}{-1} = \frac{z-0}{1} = \frac{-(0-0+0-4)}{9+1+1}$$

$$\frac{x}{3} = \frac{y}{-1} = \frac{z}{1} = \frac{4}{11}$$

$$\Rightarrow O' \left(\frac{12}{11}, \frac{-4}{11}, \frac{4}{11} \right)$$

for P'

$$\frac{x-2}{3} = \frac{y+1}{-1} = \frac{z-1}{1} = \frac{-(3(2)-(-1)+1-4)}{9+1+1}$$

$$\frac{x-2}{3} = \frac{y+1}{-1} = \frac{z-1}{1} = \left(\frac{-4}{11} \right)$$

$$P' \left(\frac{-12}{11} + 2, \frac{4}{11} - 1, \frac{-4}{11} + 1 \right)$$

$$\Rightarrow P' \left(\frac{10}{11}, \frac{-7}{11}, \frac{7}{11} \right)$$

$$O'P' = \sqrt{\left(\frac{10}{11} - \frac{12}{11} \right)^2 + \left(\frac{-7}{11} + \frac{4}{11} \right)^2 + \left(\frac{7}{11} - \frac{4}{11} \right)^2}$$

$$\Rightarrow O'P' = \frac{1}{11} \sqrt{4+9+9}$$

$$\Rightarrow O'P' = \frac{\sqrt{22}}{11}$$

$$\Rightarrow O'P' = \frac{\sqrt{2} \times \sqrt{11}}{11}$$

$$\Rightarrow O'P' = \sqrt{\frac{2}{11}}$$

2. The contrapositive of the statement "If you will work, you will earn money" is:

- (1) If you will not earn money, you will not work
- (2) You will earn money, if you will not work
- (3) If you will earn money, you will work
- (4) To earn money, you need to work

Ans. (1)

Sol. Contrapositive of $p \rightarrow q$ is $\sim q \rightarrow \sim p$

$p \rightarrow$ you will work

$q \rightarrow$ you will earn money

$\sim q \rightarrow$ you will not earn money

$\sim p \rightarrow$ you will not work

$\sim q \rightarrow \sim p \Rightarrow$ if you will not earn money, you will not work.

3. If $\alpha, \beta \in \mathbb{R}$ are such that $1 - 2i$ (here $i^2 = -1$) is a root of $z^2 + \alpha z + \beta = 0$, then $(\alpha - \beta)$ is equal to:

- (1) 7
- (2) -3
- (3) 3
- (4) -7

Ans. (4)

Sol. $(1 - 2i)^2 + \alpha(1 - 2i) + \beta = 0$
 $1 - 4 - 4i + \alpha - 2i\alpha + \beta = 0$
 $(\alpha + \beta - 3) - i(4 + 2\alpha) = 0$
 $\alpha + \beta - 3 = 0 \quad \& \quad 4 + 2\alpha = 0$
 $\alpha = -2 \quad \beta = 5$
 $\alpha - \beta = -7$

4. If $I_n = \int_{\pi/4}^{\pi/2} \cot^n x \, dx$, then:

(1) $\frac{1}{I_2 + I_4}, \frac{1}{I_3 + I_5}, \frac{1}{I_4 + I_6}$ are in G.P.

(2) $\frac{1}{I_2 + I_4}, \frac{1}{I_3 + I_5}, \frac{1}{I_4 + I_6}$ are in A.P.

(3) $I_2 + I_4, I_3 + I_5, I_4 + I_6$ are in A.P.

(4) $I_2 + I_4, (I_3 + I_5)^2, I_4 + I_6$ are in G.P.

Ans. (2)

Sol. $I_{n+2} + I_n = \int_{\pi/4}^{\pi/2} \cot^n x \cdot \cos \operatorname{csc}^2 x \, dx = \left[\frac{-(\cot x)^{n+1}}{n+1} \right]_{\pi/4}^{\pi/2}$

$$I_{n+2} + I_n = \frac{1}{n+1}$$

$$I_2 + I_4 = \frac{1}{3}, I_3 + I_5 = \frac{1}{4}, I_4 + I_6 = \frac{1}{5}$$

5. If for the matrix, $A = \begin{bmatrix} 1 & -\alpha \\ \alpha & \beta \end{bmatrix}$, $AA^T = I_2$, then the value of $\alpha^4 + \beta^4$ is:

(1) 1

(2) 3

(3) 2

(4) 4

Ans. (1)

Sol. $\begin{bmatrix} 1 & -\alpha \\ \alpha & \beta \end{bmatrix} \begin{bmatrix} 1 & \alpha \\ -\alpha & \beta \end{bmatrix} = \begin{bmatrix} 1 + \alpha^2 & \alpha - \alpha\beta \\ \alpha - \alpha\beta & \alpha^2 + \beta^2 \end{bmatrix} = \begin{bmatrix} 1 & 0 \\ 0 & 1 \end{bmatrix}$

$$1 + \alpha^2 = 1$$

$$\alpha^2 = 0$$

$$\alpha^2 + \beta^2 = 1$$

$$\beta^2 = 1$$

$$\alpha^4 = 0$$

$$\beta^4 = 1$$

$$\alpha^4 + \beta^4 = 1$$

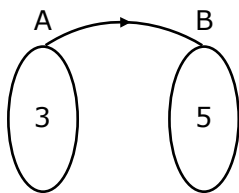
6. Let x denote the total number of one-one functions from a set A with 3 elements to a set B with 5 elements and y denote the total number of one-one functions from the set A to the set $A \times B$.

Then:

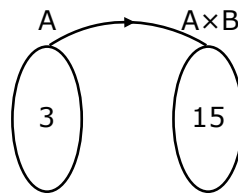
- (1) $y = 273x$
- (2) $2y = 91x$
- (3) $y = 91x$
- (4) $2y = 273x$

Ans. (2)

Sol. Number of elements in $A = 3$
 Number of elements in $B = 5$
 Number of elements in $A \times B = 15$



Number of one-one function
 $x = 5 \times 4 \times 3$
 $x = 60$



Number of one-one function
 $y = 15 \times 14 \times 13$
 $y = 15 \times 4 \times \frac{14}{4} \times 13$
 $y = 60 \times \frac{7}{2} \times 13$
 $2y = (13)(7x)$
 $2y = 91x$

7. If the curve $x^2 + 2y^2 = 2$ intersects the line $x + y = 1$ at two points P and Q , then the angle subtended by the line segment PQ at the origin is:

- (1) $\frac{\pi}{2} + \tan^{-1}\left(\frac{1}{4}\right)$
- (2) $\frac{\pi}{2} - \tan^{-1}\left(\frac{1}{4}\right)$
- (3) $\frac{\pi}{2} + \tan^{-1}\left(\frac{1}{3}\right)$
- (4) $\frac{\pi}{2} - \tan^{-1}\left(\frac{1}{3}\right)$

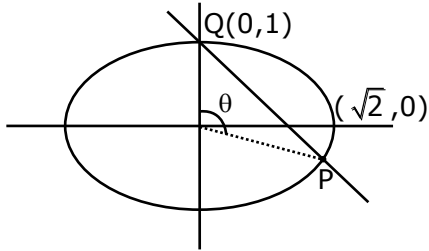
रिपिटर्स बैच का सर्वश्रेष्ठ परिणाम सिर्फ मोशन के साथ

MOTION™

Ans. (1)

Sol. Ellipse $\frac{x^2}{2} + \frac{y^2}{1} = 1$

Line $x + y = 1$



Using homogenisation

$$x^2 + 2y^2 = 2(1)^2$$

$$x^2 + 2y^2 = 2(x + y)^2$$

$$x^2 + 2y^2 = 2x^2 + 2y^2 + 4xy$$

$$x^2 + 4xy = 0$$

$$\text{for } ax^2 + 2hxy + by^2 = 0$$

$$\tan\theta = \left| \frac{2\sqrt{h^2 - ab}}{a + b} \right|$$

$$\tan\theta = \left| \frac{2\sqrt{(2)^2 - 0}}{1 + 0} \right|$$

$$\tan\theta = -4$$

$$\cot\theta = -\frac{1}{4}$$

$$\theta = \cot^{-1}\left(-\frac{1}{4}\right)$$

$$\theta = \pi - \cot^{-1}\left(\frac{1}{4}\right)$$

$$\theta = \pi - \left(\frac{\pi}{2} - \tan^{-1}\left(\frac{1}{4}\right)\right)$$

$$\theta = \frac{\pi}{2} + \tan^{-1}\left(\frac{1}{4}\right)$$

Toll Free : 1800-212-1799

www.motion.ac.in | Email : info@motion.ac.in

8. The integral $\int \frac{e^{3\log_e 2x} + 5e^{2\log_e 2x}}{e^{4\log_e x} + 5e^{3\log_e x} - 7e^{2\log_e x}} dx, x > 0$, is equal to:

(where c is a constant of integration)

(1) $\log_e |x^2 + 5x - 7| + c$

(2) $\frac{1}{4} \log_e |x^2 + 5x - 7| + c$

(3) $4\log_e |x^2 + 5x - 7| + c$

(4) $\log_e \sqrt{x^2 + 5x - 7} + c$

Ans. (3)

Sol.
$$\int \frac{e^{3\log_e 2x} + 5e^{2\log_e 2x}}{e^{4\log_e x} + 5e^{3\log_e x} - 7e^{2\log_e x}} dx$$
$$= \int \frac{8x^3 + 5(4x^2)}{x^4 + 5x^3 - 7x^2} dx$$
$$= \int \frac{8x^3 + 20x^2}{x^4 + 5x^3 - 7x^2} dx$$
$$= \int \frac{8x + 20}{x^2 + 5x - 7} dx$$
$$= \int \frac{4(2x + 5)}{x^2 + 5x - 7} dx \quad \left\{ \begin{array}{l} \text{Let } x^2 + 5x - 7 = t \\ (2x + 5) dx = dt \end{array} \right.$$
$$= \int \frac{4dt}{t}$$
$$= 4 \ln |t| + C$$
$$= 4 \ln |(x^2 + 5x - 7)| + c$$

Toll Free : 1800-212-1799

www.motion.ac.in | Email : info@motion.ac.in

9. A hyperbola passes through the foci of the ellipse $\frac{x^2}{25} + \frac{y^2}{16} = 1$ and its transverse and conjugate axes coincide with major and minor axes of the ellipse, respectively. If the product of their eccentricities is one, then the equation of the hyperbola is:

- (1) $\frac{x^2}{9} - \frac{y^2}{4} = 1$
 (2) $\frac{x^2}{9} - \frac{y^2}{16} = 1$
 (3) $x^2 - y^2 = 9$
 (4) $\frac{x^2}{9} - \frac{y^2}{25} = 1$

Ans. (2)

$$e_1 = \sqrt{1 - \frac{16}{25}} = \frac{3}{5} \quad \text{foci } (\pm ae, 0)$$

$$\text{Foci } = (\pm 3, 0)$$

$$\text{Let equation of hyperbola be } \frac{x^2}{A^2} - \frac{y^2}{B^2} = 1$$

$$\text{Passes through } (\pm 3, 0)$$

Sol. $A^2 = 9, A = 3, e_2 = \frac{5}{3}$

$$e_2^2 = 1 + \frac{B^2}{A^2}$$

$$\frac{25}{9} = 1 + \frac{B^2}{9} \Rightarrow B^2 = 16$$

$$\text{Ans } \frac{x^2}{9} - \frac{y^2}{16} = 1$$

10. $\lim_{x \rightarrow \infty} \left[\frac{1}{n} + \frac{n}{(n+1)^2} + \frac{n}{(n+2)^2} + \dots + \frac{n}{(2n-1)^2} \right]$ is equal to:

- (1) 1
 (2) $\frac{1}{3}$
 (3) $\frac{1}{2}$
 (4) $\frac{1}{4}$

Ans. (3)

$$\lim_{x \rightarrow \infty} \sum_{r=0}^{n-1} \frac{n}{(n+r)^2} = \lim_{x \rightarrow \infty} \sum_{r=0}^{n-1} \frac{n^2}{n^2 \left(1 + \frac{r}{n}\right)^2} = \int_0^1 \frac{dx}{(1+x)^2}$$

Sol.

$$= - \left[\frac{1}{1+x} \right]_0^1 \Rightarrow - \left[\frac{1}{2} - 1 \right] = \frac{1}{2}$$

- 11.** In a group of 400 people, 160 are smokers and non-vegetarian; 100 are smokers and vegetarian and the remaining 140 are non-smokers and vegetarian. Their chances of getting a particular chest disorder are 35%, 20% and 10% respectively. A person is chosen from the group at random and is found to be suffering from the chest disorder. The probability that the selected person is a smoker and non-vegetarian is:

(1) $\frac{7}{45}$

(2) $\frac{8}{45}$

(3) $\frac{14}{45}$

(4) $\frac{28}{45}$

Ans. (4)

Sol. Based on Baye's theorem

$$\begin{aligned} \text{Probability} &= \frac{\left(160 \times \frac{35}{100}\right)}{\left(160 \times \frac{35}{100}\right) + \left(100 \times \frac{20}{100}\right) + \left(140 \times \frac{10}{100}\right)} \\ &= \frac{5600}{9000} \\ &= \frac{28}{45} \end{aligned}$$

- 12.** The following system of linear equations

$$3x + 3y + 2z = 9$$

$$3x + 2y + 2z = 9$$

$$x - y + 4z = 8$$

- (1) does not have any solution
(2) has a unique solution
(3) has a solution (α, β, γ) satisfying $\alpha + \beta^2 + \gamma^3 = 12$
(4) has infinitely many solutions

Ans. (2)

Toll Free : 1800-212-1799

www.motion.ac.in | Email : info@motion.ac.in

Sol. $\Delta = \begin{vmatrix} 2 & 3 & 2 \\ 3 & 2 & 2 \\ 1 & -1 & 4 \end{vmatrix} = -20 \neq 0 \quad \therefore \text{unique solution}$

$$\Delta_x = \begin{vmatrix} 9 & 3 & 2 \\ 9 & 2 & 2 \\ 8 & -1 & 4 \end{vmatrix} = 0$$

$$\Delta_y = \begin{vmatrix} 2 & 9 & 2 \\ 3 & 9 & 2 \\ 1 & 8 & 4 \end{vmatrix} = -20$$

$$\Delta_z = \begin{vmatrix} 2 & 3 & 9 \\ 3 & 2 & 9 \\ 1 & -1 & 8 \end{vmatrix} = -40$$

$$\therefore x = \frac{\Delta_x}{\Delta} = 0$$

$$y = \frac{\Delta_y}{\Delta} = 1$$

$$z = \frac{\Delta_z}{\Delta} = 2$$

Unique solution: (0, 1, 2)

13. The minimum value of $f(x) = a^{ax} + a^{1-ax}$, where $a, x \in \mathbb{R}$ and $a > 0$, is equal to:

- (1) $a + \frac{1}{a}$
- (2) $a + 1$
- (3) $2a$
- (4) $2\sqrt{a}$

Ans. (4)

Sol. $AM \geq GM$

$$\frac{a^{ax} + \frac{a}{a^{ax}}}{2} \geq \left(a^{ax} \cdot \frac{a}{a^{ax}} \right)^{1/2} \Rightarrow a^{ax} + a^{1-ax} \geq 2\sqrt{a}$$

14. A function $f(x)$ is given by $f(x) = \frac{5^x}{5^x + 5}$, then the sum of the series

$$f\left(\frac{1}{20}\right) + f\left(\frac{2}{20}\right) + f\left(\frac{3}{20}\right) + \dots + f\left(\frac{39}{20}\right)$$

is equal to:

(1) $\frac{19}{2}$

(2) $\frac{49}{2}$

(3) $\frac{39}{2}$

(4) $\frac{29}{2}$

Ans. (3)

Sol.

$$f(x) = \frac{5^x}{5^x + 5} \dots (i)$$

$$f(2-x) = \frac{5^{2-x}}{5^{2-x} + 5}$$

$$f(2-x) = \frac{5}{5^x + 5} \dots (ii)$$

Adding equation (i) and (ii)

$$f(x) + f(2-x) = 1$$

$$f\left(\frac{1}{20}\right) + f\left(\frac{39}{20}\right) = 1$$

$$f\left(\frac{2}{20}\right) + f\left(\frac{38}{20}\right) = 1$$

:

:

$$f\left(\frac{19}{20}\right) + f\left(\frac{21}{20}\right) = 1$$

$$\text{and } f\left(\frac{20}{20}\right) = f(1) = \frac{1}{2}$$

$$\Rightarrow 19 + \frac{1}{2} \Rightarrow \frac{39}{2}$$

15. Let α and β be the roots of $x^2 - 6x - 2 = 0$. If $a_n = \alpha^n - \beta^n$ for $n \geq 1$, then the value of $\frac{a_{10} - 2a_8}{3a_9}$

is:

(1) 4

(2) 1

(3) 2

(4) 3

Ans. (3)

Sol. $x^2 - 6x - 2 = 0$ $\begin{cases} \alpha & \alpha + \beta = 6 \\ \beta & \alpha\beta = -2 \end{cases}$

and $\alpha^2 - 6\alpha - 2 = 0 \Rightarrow \alpha^2 - 2 = 6\alpha$
 $\beta^2 - 6\beta - 2 = 0 \Rightarrow \beta^2 - 2 = 6\beta$

$$\begin{aligned} \frac{a_{10} - 2a_8}{3a_9} &= \frac{(\alpha^{10} - \beta^{10}) - 2(\alpha^8 - \beta^8)}{3(\alpha^9 - \beta^9)} \\ &= \frac{(\alpha^{10} - 2\alpha^8) - (\beta^{10} - 2\beta^8)}{3(\alpha^9 - \beta^9)} \\ \text{Now} \quad &= \frac{\alpha^8(\alpha^2 - 2) - \beta^8(\beta^2 - 2)}{3(\alpha^9 - \beta^9)} \\ &= \frac{\alpha^8(6\alpha) - \beta^8(6\beta)}{3(\alpha^9 - \beta^9)} = \frac{6(\alpha^9 - \beta^9)}{3(\alpha^9 - \beta^9)} = \frac{6}{3} = 2 \end{aligned}$$

16. Let A be a 3×3 matrix with $\det(A) = 4$. Let R_i denote the i^{th} row of A . If a matrix B is obtained by performing the operation $R_2 \rightarrow 2R_2 + 5R_3$ on $2A$, then $\det(B)$ is equal to:

(1) 64

(2) 16

(3) 80

(4) 128

Ans. (1)

Sol.

$$A = \begin{bmatrix} R_{11} & R_{12} & R_{13} \\ R_{21} & R_{22} & R_{23} \\ R_{31} & R_{32} & R_{33} \end{bmatrix}$$

$$2A = \begin{bmatrix} 2R_{11} & 2R_{12} & 2R_{13} \\ 2R_{21} & 2R_{22} & 2R_{23} \\ 2R_{31} & 2R_{32} & 2R_{33} \end{bmatrix}$$

$$R_2 \rightarrow 2R_2 + 5R_3$$

$$B = \begin{bmatrix} 2R_{11} & 2R_{12} & 2R_{13} \\ 4R_{21} + 10R_{31} & 4R_{22} + 10R_{32} & 4R_{23} + 10R_{33} \\ 2R_{31} & 2R_{32} & 2R_{33} \end{bmatrix}$$

$$R_2 \rightarrow R_2 - 5R_3$$

$$B = \begin{bmatrix} 2R_{11} & 2R_{12} & 2R_{13} \\ 4R_{21} & 4R_{22} & 4R_{23} \\ 2R_{31} & 2R_{32} & 2R_{33} \end{bmatrix}$$

$$|B| = \begin{vmatrix} 2R_{11} & 2R_{12} & 2R_{13} \\ 4R_{21} & 4R_{22} & 4R_{23} \\ 2R_{31} & 2R_{32} & 2R_{33} \end{vmatrix}$$

$$|B| = 2 \times 2 \times 4 \begin{vmatrix} R_{11} & R_{12} & R_{13} \\ R_{21} & R_{22} & R_{23} \\ R_{31} & R_{32} & R_{33} \end{vmatrix}$$

$$= 16 \times 4$$

$$= 64$$

17. The shortest distance between the line $x - y = 1$ and the curve $x^2 = 2y$ is:

(1) $\frac{1}{2}$

(2) 0

(3) $\frac{1}{2\sqrt{2}}$

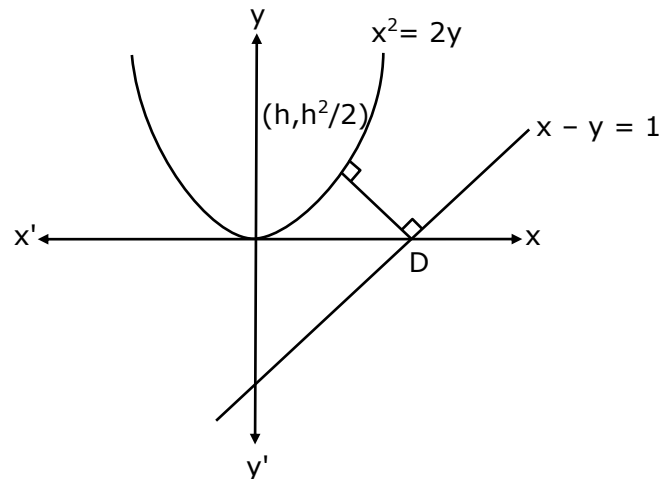
(4) $\frac{1}{\sqrt{2}}$

Toll Free : 1800-212-1799

www.motion.ac.in | Email : info@motion.ac.in

Ans. (3)

Sol. Shortest distance must be along common normal



m_1 (slope of line $x - y = 1$) = 1 \Rightarrow slope of perpendicular line = -1

$m_2 = \frac{2x}{2} = x \Rightarrow m_2 = h \Rightarrow$ slope of normal = $-\frac{1}{h}$

$-\frac{1}{h} = -1 \Rightarrow h = 1$

so point is $(1, \frac{1}{2})$

$$D = \frac{\left| 1 - \frac{1}{2} - 1 \right|}{\sqrt{1+1}} = \frac{1}{2\sqrt{2}}$$

18. Let A be a set of all 4-digit natural numbers whose exactly one digit is 7. Then the probability that a randomly chosen element of A leaves remainder 2 when divided by 5 is:

(1) $\frac{1}{5}$

(2) $\frac{2}{9}$

(3) $\frac{97}{297}$

(4) $\frac{122}{297}$

Ans. (3)

Sol. Total cases

$$(4 \times 9 \times 9 \times 9) - (3 \times 9 \times 9)$$

$$\text{Probability} = \frac{(3 \times 9 \times 9) - (2 \times 9) + (8 \times 9 \times 9)}{(4 \times 9^3) - (3 \times 9^2)}$$

$$= \frac{97}{217}$$

19. $\operatorname{cosec}\left[2 \cot^{-1}(5) + \cos^{-1}\left(\frac{4}{5}\right)\right]$ is equal to:

(1) $\frac{75}{56}$

(2) $\frac{65}{56}$

(3) $\frac{56}{33}$

(4) $\frac{65}{33}$

Ans. (2)

Sol. $\operatorname{cosec}\left(2 \cot^{-1}(5) + \cos^{-1}\left(\frac{4}{5}\right)\right)$

$$\operatorname{cosec}\left(2 \tan^{-1}\left(\frac{1}{5}\right) + \cos^{-1}\left(\frac{4}{5}\right)\right)$$

$$= \operatorname{cosec}\left(\tan^{-1}\left(\frac{2\left(\frac{1}{5}\right)}{1 - \left(\frac{1}{5}\right)^2}\right) + \cos^{-1}\left(\frac{4}{5}\right)\right)$$

$$= \operatorname{cosec}\left(\tan^{-1}\left(\frac{5}{12}\right) + \cos^{-1}\left(\frac{4}{5}\right)\right)$$

Let $\tan^{-1}(5/12) = \theta \Rightarrow \sin \theta = \frac{5}{13}, \cos \theta = \frac{12}{13}$

and $\cos^{-1}\left(\frac{4}{5}\right) = \phi \Rightarrow \cos \phi = \frac{4}{5}$ and $\sin \phi = \frac{3}{5}$

$$= \operatorname{cosec}(\theta + \phi)$$

$$= \frac{1}{\sin \theta \cos \phi + \cos \theta \sin \phi}$$

$$= \frac{1}{\frac{5}{13} \cdot \frac{4}{5} + \frac{12}{13} \cdot \frac{3}{5}} = \frac{65}{56}$$

Toll Free : 1800-212-1799

www.motion.ac.in | Email : info@motion.ac.in

20. If $0 < x, y < \pi$ and $\cos x + \cos y - \cos(x + y) = \frac{3}{2}$, then $\sin x + \cos y$ is equal to:

(1) $\frac{1 + \sqrt{3}}{2}$

(2) $\frac{1 - \sqrt{3}}{2}$

(3) $\frac{\sqrt{3}}{2}$

(4) $\frac{1}{2}$

Ans. (1)

Sol.

$$2 \cos\left(\frac{x+y}{2}\right) \cos\left(\frac{x-y}{2}\right) - \left[2 \cos^2\left(\frac{x+y}{2}\right) - 1\right] = \frac{3}{2}$$

$$2 \cos\left(\frac{x+y}{2}\right) \left[\cos\left(\frac{x-y}{2}\right) - \cos\left(\frac{x+y}{2}\right)\right] = \frac{1}{2}$$

$$2 \cos\left(\frac{x+y}{2}\right) \left[2 \sin\left(\frac{x}{2}\right) \cdot \sin\left(\frac{y}{2}\right)\right] = \frac{1}{2}$$

$$\cos\left(\frac{x+y}{2}\right) \cdot \sin\left(\frac{x}{2}\right) \cdot \sin\left(\frac{y}{2}\right) = \frac{1}{8}$$

Possible when $\frac{x}{2} = 30^\circ$ & $\frac{y}{2} = 30^\circ$

$x = y = 60^\circ$

$$\sin x + \cos y = \frac{\sqrt{3}}{2} + \frac{1}{2} = \frac{\sqrt{3} + 1}{2}$$

SECTION-B

1. If $\lim_{x \rightarrow 0} \frac{ax - (e^{4x} - 1)}{ax(e^{4x} - 1)}$ exists and is equal to b , then the value of $a - 2b$ is _____.

Ans. (5)

$$\lim_{x \rightarrow 0} \frac{ax - (e^{4x} - 1)}{ax(e^{4x} - 1)}$$

Applying L' Hospital Rule

$$\lim_{x \rightarrow 0} \frac{a - 4e^{4x}}{a(e^{4x} - 1) + ax(4e^{4x})} \quad \text{So } a = 4$$

Sol. Applying L' Hospital Rule

$$\lim_{x \rightarrow 0} \frac{-16e^{4x}}{a(4e^{4x}) + a(4e^{4x}) + ax(16e^{4x})}$$

$$\frac{-16}{4a + 4a} = \frac{-16}{32} = -\frac{1}{2} = b$$

$$a - 2b = 4 - 2\left(-\frac{1}{2}\right) = 4 + 1 = 5$$

2. A line is a common tangent to the circle $(x - 3)^2 + y^2 = 9$ and the parabola $y^2 = 4x$. If the two points of contact (a, b) and (c, d) are distinct and lie in the first quadrant, then $2(a+c)$ is equal to _____.

Ans. (9)

Sol. Circle: $(x - 3)^2 + y^2 = 9$

Parabola: $y^2 = 4x$

Let tangent $y = mx + \frac{a}{m}$

$$y = mx + \frac{1}{m}$$

$$m^2x - my + 1 = 0$$

the above line is also tangent to circle

$$(x - 3)^2 + y^2 = 9$$

$$\therefore \perp \text{ from } (3, 0) = 3$$

$$\left| \frac{3m^2 - 0 + 1}{\sqrt{m^2 + m^4}} \right| = 3$$

$$(3m^2 + 1)^2 = 9(m^2 + m^4)$$

Toll Free : 1800-212-1799

www.motion.ac.in | Email : info@motion.ac.in

रिपिटर्स बैच का सर्वश्रेष्ठ परिणाम सिर्फ मोशन के साथ

MOTION™

$$6m^2 + 1 + 9m^4 = 9m^2 + 9m^4$$

$$3m^2 = 1$$

$$m = \pm \frac{1}{\sqrt{3}}$$

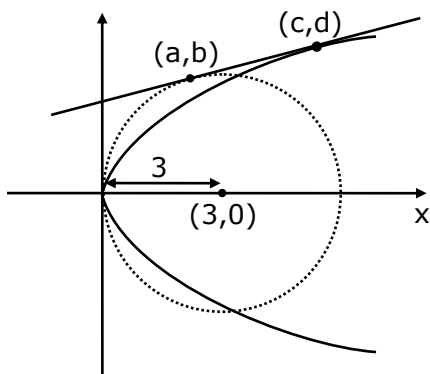
∴ tangent is

$$y = \frac{1}{\sqrt{3}}x + \sqrt{3} \quad \text{or} \quad y = -\frac{1}{\sqrt{3}}x - \sqrt{3}$$

(it will be used)

(rejected)

$$m = \frac{1}{\sqrt{3}}$$



for Parabola $\left(\frac{a}{m^2}, \frac{2a}{m}\right) \equiv (3, 2\sqrt{3})$

(c, d)

for Circle $y = \frac{1}{\sqrt{3}}x + \sqrt{3}$ & $(x - 3)^2 + y^2 = 9$

solving, $(x - 3)^2 + \left(\frac{1}{\sqrt{3}}x + \sqrt{3}\right)^2 = 9$

$$x^2 + 9 - 6x + \frac{1}{3}x^2 + 3 + 2x = 9$$

$$\frac{4}{3}x^2 - 4x + 3 = 0$$

$$4x^2 - 12x + 9 = 0$$

$$4x^2 - 6x - 6x + 9 = 0$$

$$2x(2x - 3) - 3(2x - 3) = 0$$

$$(2x - 3)(2x - 3) = 0$$

$$x = \frac{3}{2}$$

Toll Free : 1800-212-1799

www.motion.ac.in | Email : info@motion.ac.in

$$\therefore y = \frac{1}{\sqrt{3}}\left(\frac{3}{2}\right) + \sqrt{3}$$

$$y = \frac{\sqrt{3}}{2} + \sqrt{3}$$

$$y = \frac{3\sqrt{3}}{2}$$

$$(a, b) \equiv \left(\frac{3}{2}, \frac{3\sqrt{3}}{2}\right)$$

$$2(a + c) = 2\left(\frac{3}{2} + 3\right)$$

$$= 2\left(\frac{3}{2} + \frac{6}{2}\right)$$

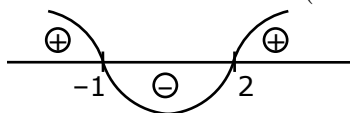
$$= 9$$

3. The value of $\int_{-2}^2 |3x^2 - 3x - 6| dx$ is _____.

Ans. (19)

Sol. $3 \int_{-2}^2 |x^2 - x - 2| dx$ $x^2 - x - 2$

$$= (x-2)(x+1)$$



$$= 3 \left\{ \int_{-2}^{-1} (x^2 - x - 2) dx + \int_{-1}^2 (-x^2 + x + 2) dx \right\}$$

$$= 3 \left[\left(\frac{x^3}{3} - \frac{x^2}{2} - 2x \right)_{-2}^{-1} - \left(\frac{x^3}{3} - \frac{x^2}{2} - 2x \right)_{-1}^2 \right]$$

$$= 19$$

Toll Free : 1800-212-1799

www.motion.ac.in | Email : info@motion.ac.in

4. If the remainder when x is divided by 4 is 3, then the remainder when $(2020+x)^{2022}$ is divided by 8 is _____.

Ans. (1)

Sol. Let $x = 4k + 3$

$$\begin{aligned} & (2020 + x)^{2022} \\ &= (2020 + 4k + 3)^{2022} \\ &= (4(505) + 4k + 3)^{2022} \\ &= (4P + 3)^{2022} \\ &= (4P + 4 - 1)^{2022} \\ &= (4A - 1)^{2022} \\ &= {}^{2022}C_0(4A)^0(-1)^{2022} + {}^{2022}C_1(4A)^1(-1)^{2021} + \dots \\ &= 1 + 8\lambda \end{aligned}$$

Reminder is 1.

5. A line ' l ' passing through origin is perpendicular to the lines

$$l_1 : \vec{r} = (3+t)\hat{i} + (-1+2t)\hat{j} + (4+2t)\hat{k}$$

$$l_2 : \vec{r} = (3+2s)\hat{i} + (3+2s)\hat{j} + (2+s)\hat{k}$$

If the co-ordinates of the point in the first octant on ' l_2 ' at the distance of $\sqrt{17}$ from the point of intersection of ' l ' and ' l_1 ' are (a, b, c) , then $18(a+b+c)$ is equal to _____.

Ans. (44)

Sol. $l_1 : \vec{r} = (3+t)\hat{i} + (-1+2t)\hat{j} + (4+2t)\hat{k}$

$$l_1 : \frac{x-3}{1} = \frac{y+1}{2} = \frac{z-4}{2} \quad \Rightarrow \quad \text{D.R. of } l_1 = 1, 2, 2$$

$$l_2 : \vec{r} = (3+2s)\hat{i} + (3+2s)\hat{j} + (2+s)\hat{k}$$

$$l_2 : \frac{x-3}{2} = \frac{y-3}{2} = \frac{z-2}{1} \quad \Rightarrow \quad \text{D.R. of } l_2 = 2, 2, 1$$

D.R. of l is \perp to l_1 & l_2

$$\therefore \text{D.R. of } l \parallel (l_1 \times l_2) \quad \Rightarrow \quad \langle -2, 3, -2 \rangle$$

$$\therefore \text{Equation of } l : \frac{x}{2} = \frac{y}{-3} = \frac{z}{2}$$

Toll Free : 1800-212-1799

www.motion.ac.in | Email : info@motion.ac.in

Solving ℓ & ℓ_1

$$(2\lambda, -3\lambda, 2\lambda) = (\mu + 3, 2\mu - 1, 2\mu + \mu)$$

$$\Rightarrow 2\lambda = \mu + 3$$

$$-3\lambda = 2\mu - 1$$

$$2\lambda = 2\mu + 4$$

$$\Rightarrow \mu + 3 = 2\mu + 4$$

$$\mu = -1$$

$$\lambda = 1$$

$P(2, -3, 2)$ {intersection point}

Let, $Q(2v + 3, 2v + 3, v + 2)$ be point on ℓ_2

$$\text{Now, } PQ = \sqrt{(2v+3-2)^2 + (2v+3+3)^2 + (v+2-2)^2} = \sqrt{17}$$

$$\Rightarrow (2v + 1)^2 + (2v + 6)^2 + (v)^2 = 17$$

$$\Rightarrow 9v^2 + 28v + 36 + 1 - 17 = 0$$

$$\Rightarrow 9v^2 + 28v + 20 = 0$$

$$\Rightarrow 9v^2 + 18v + 10v + 20 = 0$$

$$\Rightarrow (9v + 10)(v + 2) = 0$$

$$\Rightarrow v = -2 \text{ (rejected), } -\frac{10}{9} \text{ (accepted)}$$

$$Q\left(3 - \frac{20}{9}, 3 - \frac{20}{9}, 2 - \frac{10}{9}\right)$$

$$\left(\frac{7}{9}, \frac{7}{9}, \frac{8}{9}\right)$$

$$\therefore 18(a + b + c)$$

$$= 18\left(\frac{7}{9} + \frac{7}{9} + \frac{8}{9}\right)$$

$$= 44$$

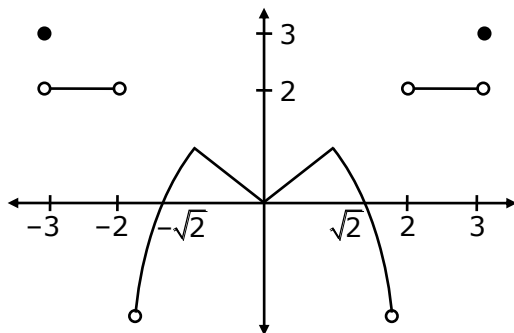
6. A function f is defined on $[-3,3]$ as

$$f(x) = \begin{cases} \min\{|x|, 2-x^2\}, & -2 \leq x \leq 2 \\ [x] & , 2 < |x| \leq 3 \end{cases}$$

where $[x]$ denotes the greatest integer $\leq x$. The number of points, where f is not differentiable in $(-3,3)$ is _____.

Ans. (5)

Sol.



Points of non-differentiability in $(-3, 3)$ are at $x = -2, -1, 0, 1, 2$.
i.e. 5 points.

7. If the curves $x = y^4$ and $xy = k$ cut at right angles, then $(4k)^6$ is equal to _____.

Ans. 4

Sol. $4y^3 \frac{dy}{dx} = 1$ & $x \frac{dy}{dx} + y = 0$

$$m_1 = \frac{1}{4y^3} \qquad \frac{dy}{dx} = \frac{-y}{x} = m_2$$

$$m_1 m_2 = -1$$

$$\frac{1}{4y^3} \times \frac{-y}{x} = -1 \quad \because x = y^4$$

$$\frac{1}{4y^6} = 1 \quad \text{and } xy = k$$

$$y^6 = \frac{1}{4} \quad \Rightarrow k = y^5$$

$$\Rightarrow k^6 = y^{30}$$

$$\Rightarrow k^6 = \left(\frac{1}{4}\right)^5$$

$$\therefore (4k)^6 = 4^6 \times k^6 = 4$$

8. The total number of two digit numbers 'n', such that $3^n + 7^n$ is a multiple of 10, is _____.

Ans. (45)

Sol. $\therefore 7^n = (10 - 3)^n = 10K + (-3)^n$
 $\therefore 7^n + 3^n = 10K + (-3)^n + 3^n$ ————— $\begin{cases} \rightarrow 10K \text{ if } n = \text{odd} \\ \rightarrow 10K + 2 \cdot 3^n \text{ if } n = \text{even} \end{cases}$
 Let $n = 2t; t \in \mathbb{N}$

$\therefore 3^n = 3^{2t} = (10 - 1)^t$
 $= 10p + (-1)^t$
 $= 10p \pm 1$
 \therefore if $n = \text{even}$ then $7^n + 3^n$ will not be multiply of 10
 So if n is odd then only $7^n + 3^n$ will be multiply of 10
 $\therefore n = 11, 13, 15, \dots, 99$
 \therefore Ans 45

9. Let $\vec{a} = \hat{i} + \alpha\hat{j} + 3\hat{k}$ and $\vec{b} = 3\hat{i} - \alpha\hat{j} + \hat{k}$. If the area of the parallelogram whose adjacent sides are represented by the vectors \vec{a} and \vec{b} is $8\sqrt{3}$ square units, then $\vec{a} \cdot \vec{b}$ is equal to _____.

Ans. (2)

Sol. $\vec{a} = \hat{i} + \alpha\hat{j} + 3\hat{k}$
 $\vec{b} = 3\hat{i} - \alpha\hat{j} + \hat{k}$
 Area of parallelogram = $|\vec{a} \times \vec{b}|$
 $= |(\hat{i} + \alpha\hat{j} + 3\hat{k}) \times (3\hat{i} - \alpha\hat{j} + \hat{k})|$
 $8\sqrt{3} = |(4\alpha)\hat{i} + 8\hat{j} - (4\alpha)\hat{k}|$
 $(64)(3) = 16\alpha^2 + 64 + 16\alpha^2$
 $(64)(3) = 32\alpha^2 + 64$
 $6 = \alpha^2 + 2$
 $\alpha^2 = 4$
 $\therefore \vec{a} = \hat{i} + \alpha\hat{j} + 3\hat{k}$
 $\vec{b} = 3\hat{i} - \alpha\hat{j} + \hat{k}$
 $\vec{a} \cdot \vec{b} = 3 - \alpha^2 + 3$
 $= 6 - \alpha^2$
 $= 6 - 4$
 $= 2$

- 10.** If the curve $y = y(x)$ represented by the solution of the differential equation $(2xy^2 - y)dx + xdy = 0$, passes through the intersection of the lines, $2x - 3y=1$ and $3x+2y=8$, then $|y(1)|$ is equal to _____.

Ans. 1

Sol. Given,

$$(2xy^2 - y)dx + xdy = 0$$

$$\Rightarrow \frac{dy}{dx} + 2y^2 - \frac{y}{x} = 0$$

$$\Rightarrow -\frac{1}{y^2} \frac{dy}{dx} + \frac{1}{y} \left(\frac{1}{x}\right) = 2$$

$$\frac{1}{y} = z$$

$$-\frac{1}{y^2} \frac{dy}{dx} = \frac{dz}{dx}$$

$$\Rightarrow \frac{dz}{dx} + z \left(\frac{1}{x}\right) = 2$$

$$\text{I.F.} = e^{\int \frac{1}{x} dx} = x$$

$$\therefore z(x) = \int 2(x) dx = x^2 + c$$

$$\Rightarrow \frac{x}{y} = x^2 + c$$

As it passes through P(2, 1)

[Point of intersection of $2x - 3y = 1$ and $3x + 2y = 8$]

$$\therefore \frac{2}{1} = 4 + c$$

$$\Rightarrow c = -2$$

$$\Rightarrow \frac{x}{y} = x^2 - 2$$

Put $x = 1$

$$\frac{1}{y} = 1 - 2 = -1$$

$$\Rightarrow y(1) = -1$$

$$\Rightarrow |y(1)| = 1$$

रिपिटर्स बैच का सर्वश्रेष्ठ परिणाम
सिर्फ मोशन के साथ

MOTION™

Another opportunity to
strengthen your preparation

UNNATI CRASH COURSE

JEE Main May 2021
at Kota Classroom

- ◆ 40 Classes of each subjects
- ◆ Doubt Clearing sessions by Expert faculties
- ◆ Full Syllabus Tests to improve your question solving skills
- ◆ Thorough learning of concepts with regular classes
- ◆ Get tips & trick along with sample papers

Course Fee : ₹ 20,000



Start your JEE Advanced 2021
Preparation with

UTTHAN CRASH COURSE

at Kota Classroom

- ◆ Complete course coverage
- ◆ 55 Classes of each subject
- ◆ 17 Full & 6 Part syllabus tests will strengthen your exam endurance
- ◆ Doubt clearing sessions under the guidance of expert faculties
- ◆ Get tips & trick along with sample papers

Course Fee : ₹ 20,000

