



**JEE
MAIN
MARCH
2021**

**16th March 2021 | Shift - 1
PHYSICS**

JEE | NEET | Foundation

MOTION™

25000+
SELECTIONS SINCE 2007

SECTION – A

1. A 25 m long antenna is mounted on an antenna tower. The height of the antenna tower is 75 m. The wavelength (in meter) of the signal transmitted by this antenna would be :
 (1) 200 (2) 400 (3) 100 (4) 300

Sol. (3)

Given that, height of peak of antenna : $H = 25$ m.

As, we know that

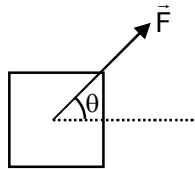
$$\lambda = 4H$$

$$\therefore \lambda = 4 \times 25$$

$$\therefore \lambda = 100 \text{ m}$$

$$\therefore (3)$$

2. A block of mass m slides along a floor while a force of magnitude F is applied to it at an angle θ as shown in figure. The coefficient of kinetic friction is μ_k . Then, the block's acceleration 'a' is given by :
 (g is acceleration due to gravity)



$$(1) \frac{F}{m} \cos \theta - \mu_k \left(g - \frac{F}{m} \sin \theta \right)$$

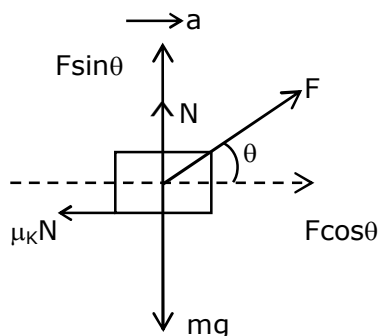
$$(2) \frac{F}{m} \cos \theta - \mu_k \left(g + \frac{F}{m} \sin \theta \right)$$

$$(3) \frac{F}{m} \cos \theta + \mu_k \left(g - \frac{F}{m} \sin \theta \right)$$

$$(4) -\frac{F}{m} \cos \theta - \mu_k \left(g - \frac{F}{m} \sin \theta \right)$$

Sol. (1)

Drawing the FBD of the block.



$$\Rightarrow N = mg - F \sin \theta \quad \dots(1)$$

$$\text{Also, } F \cos \theta - \mu_k N = m \cdot a \quad \dots(2)$$

Substituting the value of N from eq. (1) in eq. (2)

$$\Rightarrow F \cos \theta - \mu_k (mg - F \sin \theta) = m \cdot a$$

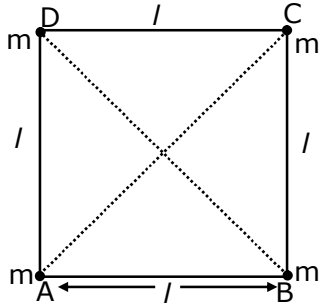
$$\Rightarrow a = \frac{F}{m} \cos \theta - \mu_k \left(g - \frac{F}{m} \sin \theta \right)$$

$$\therefore (1)$$

Toll Free : 1800-212-1799

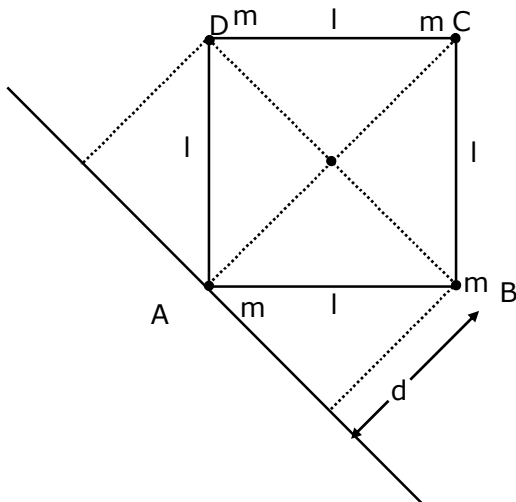
www.motion.ac.in | Email : info@motion.ac.in

3. Four equal masses, m each are placed at the corners of a square of length(l) as shown in the figure. The moment of inertia of the system about an axis passing through A and parallel to DB would be :



- (1) ml^2 (2) $3ml^2$ (3) $\sqrt{3} ml^2$ (4) $2 ml^2$

Sol. (2)



$$AC = \sqrt{l^2 + l^2}$$

$$AC = l\sqrt{2}$$

$$d = \frac{l\sqrt{2}}{2}$$

$$\Rightarrow d = \frac{l}{\sqrt{2}}$$

Moment of inertia about the axis passing through A :

$$I = m(O)^2 + m(d)^2 + m(d)^2 + M(AC)^2$$

$$\Rightarrow I = 0 + m\left(\frac{l}{\sqrt{2}}\right)^2 + m\left(\frac{l}{\sqrt{2}}\right)^2 + m(l\sqrt{2})^2$$

$$\Rightarrow I = \frac{ml^2}{2} + \frac{ml^2}{2} + 2ml^2$$

$$\Rightarrow I = 3ml^2$$

\therefore (2)

Toll Free : 1800-212-1799

www.motion.ac.in | Email : info@motion.ac.in

4. The stopping potential in the context of photoelectric effect depends on the following property of incident electromagnetic radiation :

- (1) Amplitude (2) Phase (3) Frequency (4) Intensity

Sol. (3)

Stopping potential depends on frequency, according to Einstein's photoelectric equation.

$$h\nu - h\nu_0 = eV$$

$$\Rightarrow V = \frac{h}{e}\nu - \frac{h}{e}\nu_0$$

\therefore (3)

5. One main scale division of a vernier callipers is 'a' cm and n^{th} division of the vernier scale coincide with $(n-1)^{\text{th}}$ division of the main scale. The least count of the callipers in mm is :

- (1) $\left(\frac{n-1}{10n}\right)a$ (2) $\frac{10a}{n}$ (3) $\frac{10na}{(n-1)}$ (4) $\frac{10a}{(n-1)}$

Sol. (2)

$$n \text{ VSD} = (n-1) \text{ MSD}$$

$$1 \text{ VSD} = \left(\frac{n-1}{n}\right) \text{ MSD}$$

$$\text{L.C} = 1 \text{ MSD} - 1 \text{ VSD}$$

$$= 1 \text{ MSD} - \left(\frac{n-1}{n}\right) \text{ MSD}$$

$$= 1 \text{ MSD} - 1 \text{ MSD} + \frac{\text{MSD}}{n}$$

$$= \frac{\text{MSD}}{n}$$

$$= \frac{a}{n} \text{ cm}$$

$$= \frac{10a}{n} \text{ mm}$$

\therefore (2)

6. A plane electromagnetic wave of frequency 500 MHz is travelling in vacuum along y-direction. At a particular point in space and time, $\vec{B} = 8.0 \times 10^{-8} \hat{z} \text{ T}$. The value of electric field at this point is :

(speed of light = $3 \times 10^8 \text{ ms}^{-1}$)

$\hat{x}, \hat{y}, \hat{z}$ are unit vectors along x, y and z directions.

- (1) $2.6 \hat{x} \text{ V/m}$ (2) $-2.6 \hat{y} \text{ V/m}$ (3) $24 \hat{x} \text{ V/m}$ (4) $-24 \hat{x} \text{ V/m}$

Sol. (4)

$$E_0 = B \cdot C$$

$$E_0 = (8 \times 10^{-8}) \times (3 \times 10^8)$$

$$\Rightarrow E_0 = 24$$

Direction of wave travelling is in $\vec{E} \times \vec{B}$

$$\text{So } (-\hat{x}) \times \hat{z} = +\hat{y}$$

$$\therefore \hat{E} = -24 \hat{x} \text{ V/m}$$

\therefore (4)

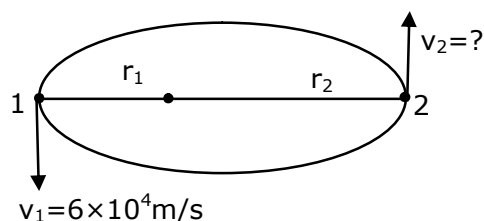
Toll Free : 1800-212-1799

www.motion.ac.in | Email : info@motion.ac.in

7. The maximum and minimum distances of a comet from the Sun are 1.6×10^{12} m and 8.0×10^{10} m respectively. If the speed of the comet at the nearest point is 6×10^4 ms⁻¹, the speed at the farthest point is :

(1) 1.5×10^3 m/s (2) 4.5×10^3 m/s (3) 3.0×10^3 m/s (4) 6.0×10^3 m/s

Sol. (3)



Let point 1 is nearest point,
and point 2 is farthest point.

Given, $r_1 = 8 \times 10^{10}$ m & $r_2 = 1.6 \times 10^{12}$ m

By angular momentum conservation

$$L_1 = L_2$$

$$mr_1v_1 = mr_2v_2$$

$$\Rightarrow v_2 = \frac{r_1v_1}{r_2}$$

$$\therefore v_2 = \frac{8 \times 10^{10} \times 6 \times 10^4}{1.6 \times 10^{12}}$$

$$\therefore v_2 = 3.0 \times 10^3 \text{ m/s}$$

\therefore (3)

8. A block of 200 g mass moves with a uniform speed in a horizontal circular groove, with vertical side walls of radius 20 cm. If the block takes 40 s to complete one round, the normal force by the side walls of the groove is :

(1) 6.28×10^{-3} N (2) 0.0314 N (3) 9.859×10^{-2} N (4) 9.859×10^{-4} N

Sol. (4)

Normal force will provide the necessary centripetal force.

$$\Rightarrow N = m\omega^2R$$

$$\text{Also; } \omega = \frac{2\pi}{T}$$

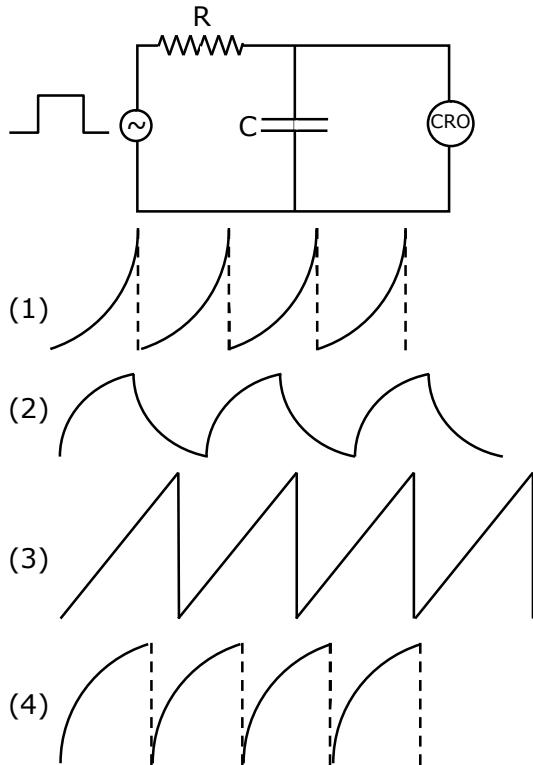
$$N = (0.2) \left(\frac{4\pi^2}{T^2} \right) (0.2)$$

$$\Rightarrow N = 0.2 \times \frac{4 \times (3.14)^2}{(40)^2} \times 0.2$$

$$\therefore N = 9.859 \times 10^{-4} \text{ N}$$

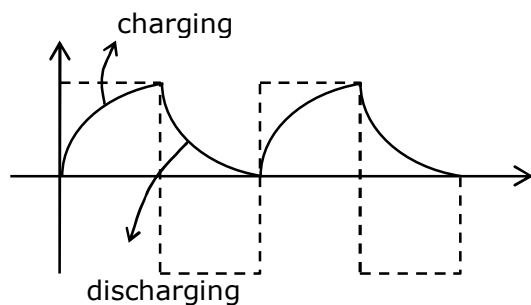
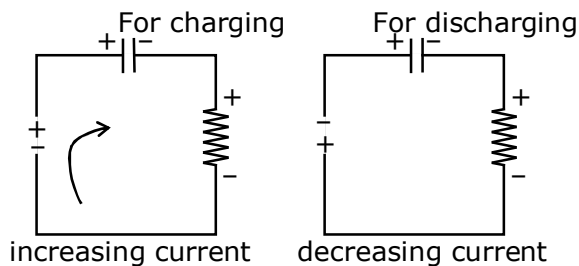
\therefore (4)

9. An RC circuit as shown in the figure is driven by a AC source generating a square wave. The output wave pattern monitored by CRO would look close to :



Sol. (2)

Assuming AC start with positive voltage, when +ve voltage is across input then the capacitor start charging, trying to reach saturation value, till there is +ve voltage across input, when -ve voltage of AC appears across input, the capacitor starts discharging till there is -ve voltage across input and this process of charging and discharging keeps on going alternatively.



∴ (2)

Toll Free : 1800-212-1799

www.motion.ac.in | Email : info@motion.ac.in

- 10.** In thermodynamics, heat and work are :
- (1) Intensive thermodynamics state variables
 - (2) Extensive thermodynamics state variables
 - (3) Path functions
 - (4) Point functions

Sol. (3)

Heat and work are path function.

Heat and work depends on the path taken to reach the final state from initial state.

∴ (3)

- 11.** A conducting wire of length 'l', area of cross-section A and electric resistivity ρ is connected between the terminals of a battery. A potential difference V is developed between its ends, causing an electric current.

If the length of the wire of the same material is doubled and the area of cross-section is halved, the resultant current would be :

- (1) $\frac{1}{4} \frac{\rho l}{VA}$ (2) $\frac{3}{4} \frac{VA}{\rho l}$ (3) $4 \frac{VA}{\rho l}$ (4) $\frac{1}{4} \frac{VA}{\rho l}$

Sol. (4)

We know that

$$R = \rho \frac{l}{A}$$

Now, new length : $l' = 2l$

new area of cross section : $A' = A/2$

$$\therefore \text{New resistance : } R' = \rho \cdot \frac{2l}{A/2}$$

$$\Rightarrow R' = 4 \frac{\rho l}{A}$$

$$\Rightarrow R' = 4R$$

$$\therefore \text{Resultant current : } I = \frac{V}{4R}$$

$$\therefore I = \frac{1}{4} \frac{VA}{\rho l}$$

∴ (4)

- 12.** The pressure acting on a submarine is 3×10^5 Pa at a certain depth. If the depth is doubled, the percentage increase in the pressure acting on the submarine would be :

(Assume that atmospheric pressure is 1×10^5 Pa density of water is 10^3 kg m^{-3} , $g = 10 \text{ ms}^{-2}$)

- (1) $\frac{200}{3}$ % (2) $\frac{5}{200}$ % (3) $\frac{200}{5}$ % (4) $\frac{3}{200}$ %

Sol. (1)

$$P = P_0 + h\rho g = 3 \times 10^5 \text{ Pa}$$

$$\Rightarrow h\rho g = 3 \times 10^5 - 1 \times 10^5$$

$$\Rightarrow h\rho g = 2 \times 10^5$$

$$\therefore 2h\rho g = 4 \times 10^5$$

$$\therefore P' = P_0 + 4 \times 10^5$$

$$\therefore P' = 5 \times 10^5 \text{ Pa}$$

$$\therefore \% \text{ increase in pressure} = \frac{P' - P}{P} \times 100$$

$$= \frac{(5 - 3) \times 10^5}{3 \times 10^5} \times 100$$

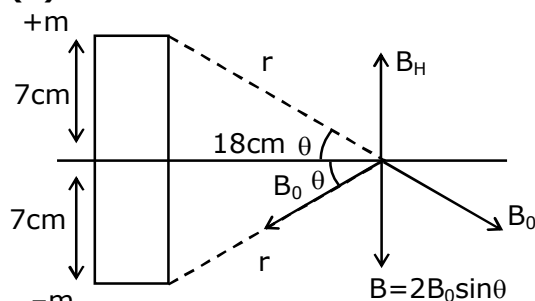
$$= \frac{200}{3} \%$$

\therefore (1)

- 13.** A bar magnet of length 14 cm is placed in the magnetic meridian with its north pole pointing towards the geographic north pole. A neutral point is obtained at a distance of 18 cm from the center of the magnet. If $B_H = 0.4 \text{ G}$, the magnetic moment of the magnet is ($1 \text{ G} = 10^{-4} \text{ T}$)

- (1) 28.80 J T^{-1} (2) 2.880 J T^{-1} (3) $2.880 \times 10^3 \text{ J T}^{-1}$ (4) $2.880 \times 10^2 \text{ J T}^{-1}$

Sol. (2)



$$B = 2B_0 \sin \theta$$

$$B = 2 \frac{\mu_0 m}{4\pi r^2} \times \frac{7}{r}$$

$$\Rightarrow 0.4 \times 10^{-4} = 2 \times 10^{-7} \times \frac{m \times 7}{(7^2 + 18^2)^{3/2}} \times 10^4$$

$$\therefore m = \frac{4 \times 10^{-2} \times (373)^{3/2}}{14}$$

$$\therefore M = m \times 14 \text{ cm} = m \times \frac{14}{100}$$

$$\therefore M = \frac{0.04 \times (373)^{3/2}}{14} \times \frac{14}{100}$$

$$\therefore M = 2.880 \text{ J/T}$$

\therefore (2)

Toll Free : 1800-212-1799

www.motion.ac.in | Email : info@motion.ac.in

- 14.** The volume V of an enclosure contains a mixture of three gases, 16 g of oxygen, 28 g of nitrogen and 44 g of carbon dioxide at absolute temperature T . Consider R as universal gas constant. The pressure of the mixture of gases is :

(1) $\frac{4RT}{V}$ (2) $\frac{88RT}{V}$ (3) $\frac{5RT}{2V}$ (4) $\frac{3RT}{V}$

Sol. (3)

No. of moles of O_2 : $n_1 = \frac{16}{32} = 0.5$ mole

No. of moles of N_2 : $n_2 = \frac{28}{28} = 1$ mole

No. of moles of CO_2 : $n_3 = \frac{44}{44} = 1$ mole

Total no. of moles in container : $n = n_1 + n_2 + n_3$

$\therefore n = 0.5 + 1 + 1 = \frac{5}{2}$ moles

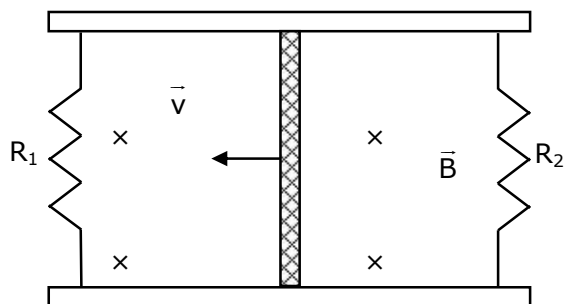
Now; $PV = nRT$

$P = \frac{nRT}{V}$

$\therefore P = \frac{5RT}{2V}$

\therefore (3)

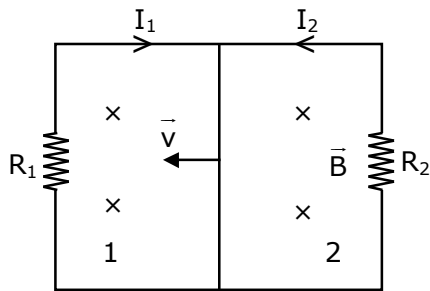
- 15.** A conducting bar of length L is free to slide on two parallel conducting rails as shown in the figure



Two resistors R_1 and R_2 are connected across the ends of the rails. There is a uniform magnetic field \vec{B} pointing into the page. An external agent pulls the bar to the left at a constant speed v . The correct statement about the directions of induced currents I_1 and I_2 flowing through R_1 and R_2 respectively is :

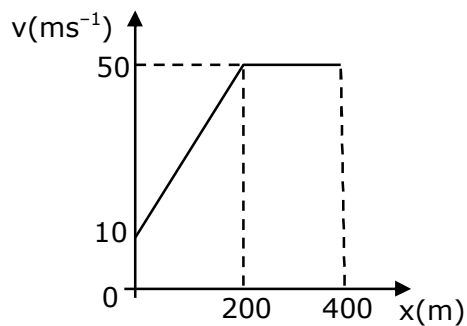
- (1) I_1 is in clockwise direction and I_2 is in anticlockwise direction
 (2) Both I_1 and I_2 are in clockwise direction
 (3) I_1 is in anticlockwise direction and I_2 is in clockwise direction
 (4) Both I_1 and I_2 are in anticlockwise direction

Sol. (1)

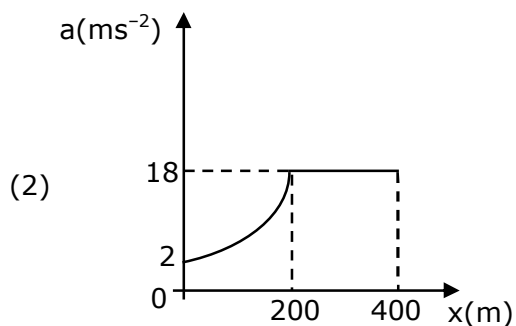
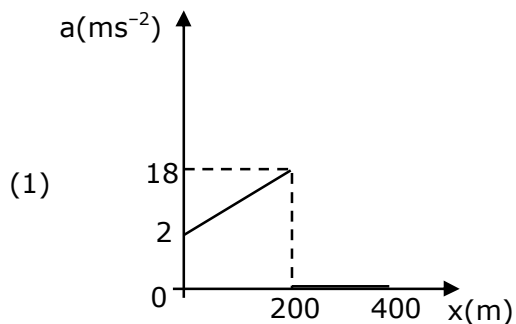


When bar slides, area of loop 1 decreases and that of loop 2 increases. Magnetic flux decreases in 1 and increases in 2. Therefore induced emf and current resist this change. As a result B should increase in 1 and decrease in 2. So I_1 should be clockwise and I_2 anticlockwise.
 \therefore (1)

16. The velocity-displacement graph describing the motion of a bicycle is shown in the figure.

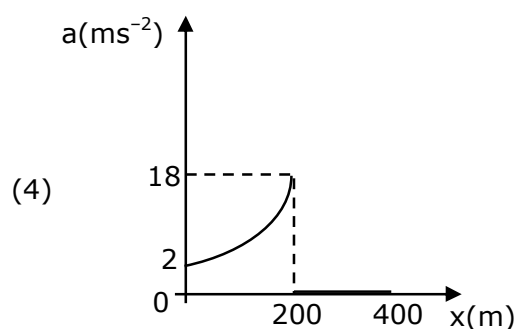
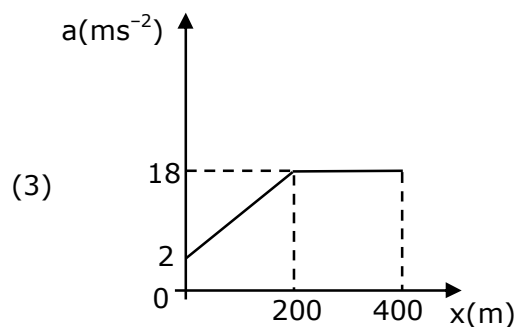


The acceleration-displacement graph of the bicycle's motion is best described by :



Toll Free : 1800-212-1799

www.motion.ac.in | Email : info@motion.ac.in

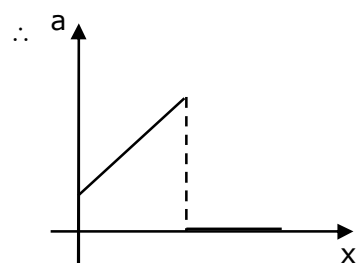


Sol. (1)

We know that ; $a = v \frac{dv}{dx}$

as slope is constant, so $a \propto v$ (from $x=0$ to 200 m)

& slope=0 so $a=0$ (from $x=200$ to 400 m)



\therefore (1)

- 17.** For changing the capacitance of a given parallel plate capacitor, a dielectric material of dielectric constant K is used, which has the same area as the plates of the capacitor. The thickness of the dielectric slab is $\frac{3}{4}d$, where ' d ' is the separation between the plate of parallel plate capacitor.

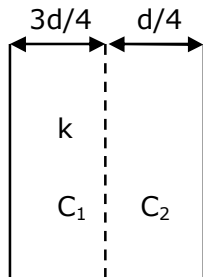
The new capacitance (C') in terms of original capacitance (C_0) is given by the following relation :

(1) $C' = \frac{4K}{K+3} C_0$ (2) $C' = \frac{4}{3+K} C_0$ (3) $C' = \frac{3+K}{4K} C_0$ (4) $C' = \frac{4+K}{3} C_0$

Sol. (1)

Toll Free : 1800-212-1799

www.motion.ac.in | Email : info@motion.ac.in



$$C_0 = \frac{\epsilon_0 A}{d}$$

$$\therefore \frac{1}{C'} = \frac{1}{C_1} + \frac{1}{C_2}$$

$$\frac{1}{C'} = \frac{(3d/4)}{\epsilon_0 KA} + \frac{(d/4)}{\epsilon_0 A}$$

$$\frac{1}{C'} = \frac{d}{4\epsilon_0 A} \left(\frac{3+K}{K} \right)$$

$$\therefore C' = \frac{4K}{(K+3)} C_0$$

\therefore (1)

- 18.** For an electromagnetic wave travelling in free space, the relation between average energy densities due to electric (U_e) and magnetic (U_m) fields is :

(1) $U_e \neq U_m$ (2) $U_e = U_m$ (3) $U_e > U_m$ (4) $U_e < U_m$

Sol. (2)

In EMW, average energy density due to electric field (U_e) and magnetic field (U_m) is same.

\therefore (2)

- 19.** Time period of a simple pendulum is T inside a lift when the lift is stationary. If the lift moves upwards with an acceleration $g/2$, the time period of pendulum will be :

(1) $\sqrt{\frac{3}{2}}T$ (2) $\frac{T}{\sqrt{3}}$ (3) $\sqrt{\frac{2}{3}}T$ (4) $\sqrt{3}T$

Sol. (3)

When lift is stationary

$$T = 2\pi\sqrt{\frac{L}{g}}$$

A pseudo force will act downwards when lift is moving upwards.

$$\therefore g_{\text{eff}} = g + \frac{g}{2} = \frac{3g}{2}$$

\therefore New time period

$$T' = 2\pi\sqrt{\frac{L}{g_{\text{eff}}}}$$

$$T' = 2\pi\sqrt{\frac{2L}{3g}}$$

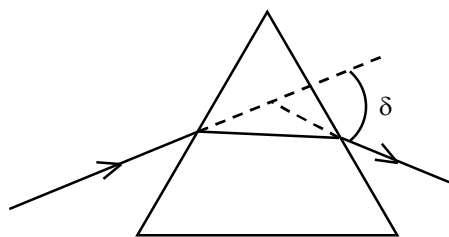
$$\therefore T' = \sqrt{\frac{2}{3}}T$$

\therefore (3)

Toll Free : 1800-212-1799

www.motion.ac.in | Email : info@motion.ac.in

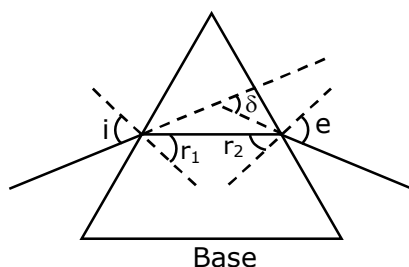
20. The angle of deviation through a prism is minimum when



- (A) Incident ray and emergent ray are symmetric to the prism
(B) The refracted ray inside the prism becomes parallel to its base
(C) Angle of incidence is equal to that of the angle of emergence
(D) When angle of emergence is doubled the angle of incidence
Choose the correct answer from the options given below :

- (1) Only statement (D) is true
(2) Statements (A), (B) and (C) are true
(3) Statements (B) and (C) are true
(4) Only statement (A) and (B) are true

Sol. (2)



Deviation is minimum in prism when ;
 $i = e$, $r_1 = r_2$ and ray inside prism is parallel to base of prism.
 \therefore (2)

SECTION – B

1. A fringe width of 6 mm was produced for two slits separated by 1 mm apart. The screen is placed 10 m away. The wavelength of light used is 'x' nm.
The value of 'x' to the nearest integer is _____.

Sol. (600)

$$\beta = 6 \text{ mm}, d = 1 \text{ mm}, D = 10 \text{ m}$$

$$\lambda = ?$$

$$\beta = \frac{\lambda D}{d}$$

$$6 \times 10^{-3} = \frac{\lambda \times 10}{1 \times 10^{-3}}$$

$$\therefore \lambda = \frac{6 \times 10^{-3} \times 1 \times 10^{-3}}{10}$$

$$\lambda = 600 \times 10^{-9} \text{ m}$$

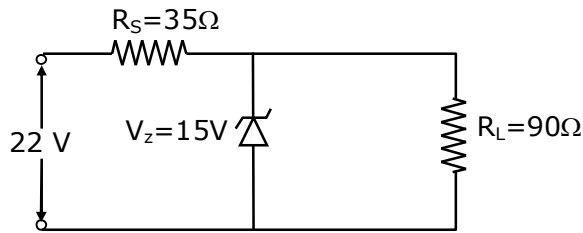
$$\therefore \lambda = 600 \text{ nm}$$

$$\therefore 600$$

Toll Free : 1800-212-1799

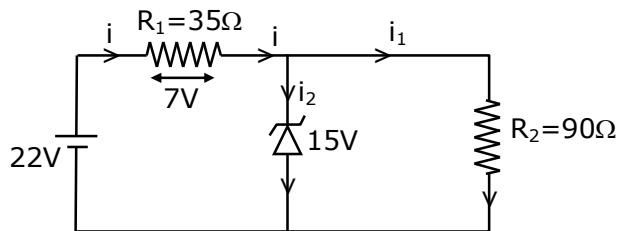
www.motion.ac.in | Email : info@motion.ac.in

2. The value of power dissipated across the zener diode ($V_z = 15\text{ V}$) connected in the circuit as shown in the figure is $x \times 10^{-1}$ watt.



The value of x , to the nearest integer, is _____.

Sol. (5)



$$i = \frac{7}{35} = \frac{1}{5} \text{ A}$$

$$i_1 = \frac{15}{90} = \frac{1}{6} \text{ A}$$

$$i_2 = i - i_1$$

$$i_2 = \frac{1}{5} - \frac{1}{6}$$

$$i_2 = \frac{1}{30} \text{ A}$$

Power across diode ; $P = V_2 i_2$

$$P = 15 \times \frac{1}{30}$$

$$P = 0.5 \text{ W}$$

$$\therefore P = 5 \times 10^{-1} \text{ W}$$

$$\therefore 5$$

3. The resistance $R = \frac{V}{I}$, where $V = (50 \pm 2)\text{ V}$ and $I = (20 \pm 0.2)\text{ A}$. The percentage error in R is 'x' %.

The value of 'x' to the nearest integer is _____.

Sol. (5)

$$R = \frac{V}{I}$$

$$\frac{\Delta R}{R} \times 100 = \frac{\Delta V}{V} \times 100 + \frac{\Delta I}{I} \times 100$$

$$\% \text{ error in } R = \frac{2}{50} \times 100 + \frac{0.2}{20} \times 100$$

$$\% \text{ error in } R = 4 + 1$$

$$\therefore \% \text{ error in } R = 5\%$$

$$\therefore 5$$

Toll Free : 1800-212-1799

www.motion.ac.in | Email : info@motion.ac.in

4. A sinusoidal voltage of peak value 250 V is applied to a series LCR circuit, in which $R = 8\Omega$, $L=24\text{ mH}$ and $C=60\ \mu\text{F}$. The value of power dissipated at resonant conditions is 'x' kW. The value of x to the nearest integer is _____.

Sol. (4)

At resonance power (P)

$$P = \frac{(V_{\text{rms}})^2}{R}$$

$$\therefore P = \frac{(250 / \sqrt{2})^2}{8}$$

$$\therefore P = 3906.25\text{ w}$$

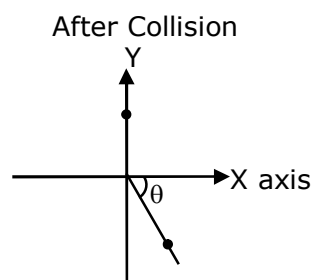
$$\therefore P \approx 4\text{ Kw}$$

$$\therefore 4$$

5. A ball of mass 10 kg moving with a velocity $10\sqrt{3}\text{ ms}^{-1}$ along X-axis, hits another ball of mass 20 kg which is at rest. After collision, the first ball comes to rest and the second one disintegrates into two equal pieces. One of the pieces starts moving along Y-axis at a speed of 10 m/s. The second piece starts moving at a speed of 20 m/s at an angle θ (degree) with respect to the X-axis.

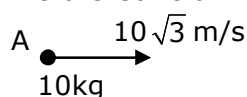
The configuration of pieces after collision is shown in the figure.

The value of θ to the nearest integer is _____.

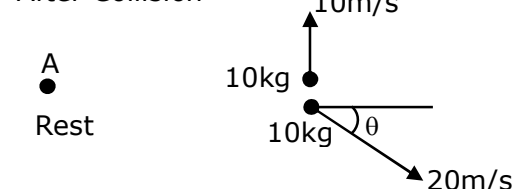


Sol. (30)

Before Collision



After Collision



Conserving momentum along x-axis

$$\vec{p}_i = \vec{p}_f$$

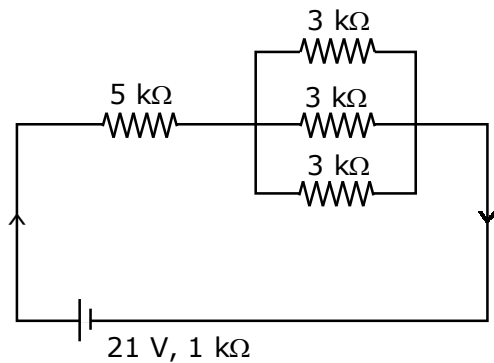
$$10 \times 10\sqrt{3} = 10 \times 20 \cos \theta$$

$$\cos \theta = \frac{\sqrt{3}}{2}$$

$$\therefore \theta = 30^\circ$$

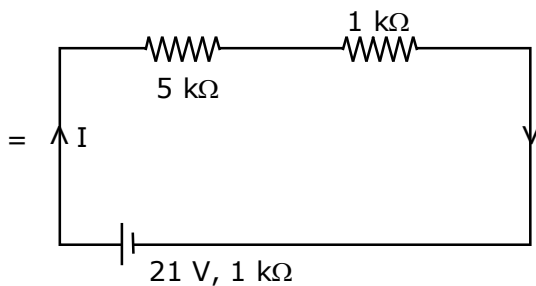
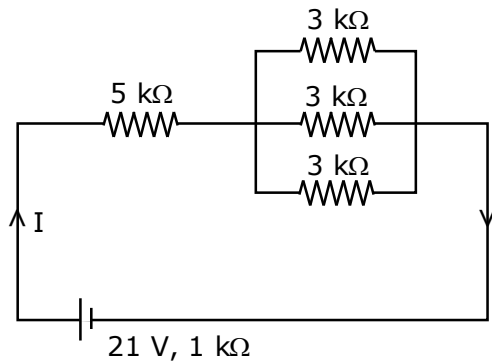
$$\therefore 30$$

6. In the figure given, the electric current flowing through the 5 kΩ resistor is 'x' mA.



The value of x to the nearest integer is _____.

Sol. (3)

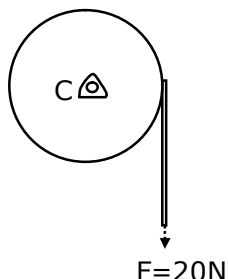


$$I = \frac{21}{5+1+1}$$

$$\therefore I = 3 \text{ mA}$$

$$\therefore 3$$

7. Consider a 20 kg uniform circular disk of radius 0.2 m. It is pin supported at its center and is at rest initially. The disk is acted upon by a constant force $F=20$ N through a massless string wrapped around its periphery as shown in the figure



Suppose the disk makes n number of revolutions to attain an angular speed of 50 rad s^{-1} . The value of n , to the nearest integer is _____.

[Given : In one complete revolution, the disk rotates by 6.28 rad]

Sol. (20)

$$\alpha = \frac{\tau}{I} = \frac{F.R.}{mR^2 / 2} = \frac{2F}{mR}$$

$$\alpha = \frac{2 \times 200}{20 \times (0.2)} = 10 \text{ rad/s}^2$$

$$\omega^2 = \omega_0^2 + 2\alpha\Delta\theta$$

$$(50)^2 = 0^2 + 2(10)\Delta\theta$$

$$\Rightarrow \Delta\theta = \frac{2500}{20}$$

$$\Delta\theta = 125 \text{ rad}$$

$$\text{No. of revolution} = \frac{125}{2\pi} \approx 20 \text{ revolution}$$

8. The first three spectral lines of H-atom in the Balmer series are given $\lambda_1, \lambda_2, \lambda_3$ considering the Bohr atomic model, the wave lengths of first and third spectral lines $\left(\frac{\lambda_1}{\lambda_3}\right)$ are related by a factor of approximately ' x ' $\times 10^{-1}$. The value of x , to the nearest integer, is _____.

Sol. (15)

For 1st line

$$\frac{1}{\lambda_1} = Rz^2 \left(\frac{1}{2^2} - \frac{1}{3^2} \right)$$

$$\frac{1}{\lambda_1} = Rz^2 \frac{5}{36} \quad \dots(i)$$

For 3rd line

Toll Free : 1800-212-1799

www.motion.ac.in | Email : info@motion.ac.in

$$\frac{1}{\lambda_3} = Rz^2 \left(\frac{1}{2^2} - \frac{1}{5^2} \right)$$

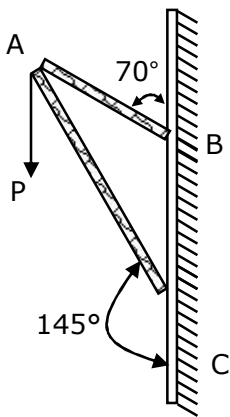
$$\frac{1}{\lambda_3} = Rz^2 \frac{21}{100} \quad \dots(ii)$$

$$\frac{(ii)}{(i)}$$

$$\frac{\lambda_1}{\lambda_3} = \frac{21}{100} \times \frac{36}{5} = 1.512 = 15.12 \times 10^{-1}$$

$$x \approx 15$$

9. Consider a frame that is made up of two thin massless rods AB and AC as shown in the figure. A vertical force \vec{P} of magnitude 100 N is applied at point A of the frame.

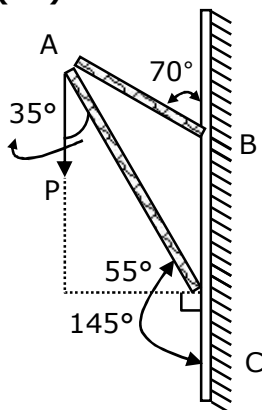


Suppose the force is \vec{P} resolved parallel to the arms AB and AC of the frame. The magnitude of the resolved component along the arm AC is xN.

The value of x, to the nearest integer, is _____.

[Given: $\sin(35^\circ)=0.573$, $\cos(35^\circ)=0.819$
 $\sin(110^\circ)=0.939$, $\cos(110^\circ)=-0.342$]

Sol. (82)

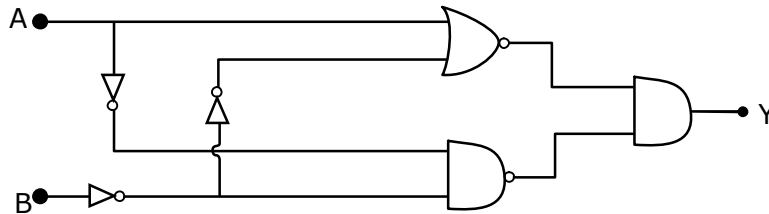


$$\begin{aligned} \text{Component along AC} &= 100 \cos 35^\circ \text{ N} \\ &= 100 \times 0.819 \text{ N} \\ &= 81.9 \text{ N} \\ &\approx 82 \text{ N} \end{aligned}$$

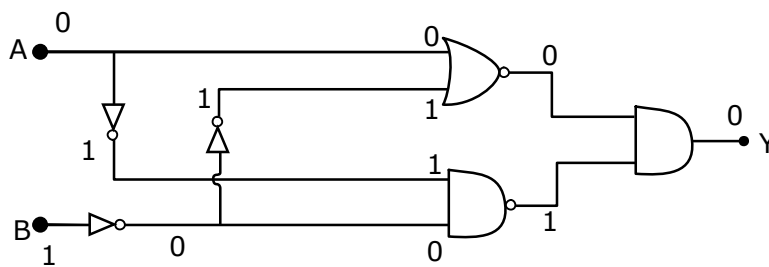
Toll Free : 1800-212-1799

www.motion.ac.in | Email : info@motion.ac.in

10. In the logic circuit shown in the figure, if input A and B are 0 to 1 respectively, the output at Y would be 'x'.
The value of x is _____.



Sol. (0)



रिपिटर्स बैच का सर्वश्रेष्ठ परिणाम
सिर्फ मोशन के साथ

MOTION™

Another opportunity to
strengthen your preparation

UNNATI CRASH COURSE

JEE Main May 2021
at Kota Classroom

- ◆ 40 Classes of each subjects
- ◆ Doubt Clearing sessions by Expert faculties
- ◆ Full Syllabus Tests to improve your question solving skills
- ◆ Thorough learning of concepts with regular classes
- ◆ Get tips & trick along with sample papers

Course Fee : ₹ 20,000



Start your JEE Advanced 2021
Preparation with

UTTHAN CRASH COURSE

at Kota Classroom

- ◆ Complete course coverage
- ◆ 55 Classes of each subject
- ◆ 17 Full & 6 Part syllabus tests will strengthen your exam endurance
- ◆ Doubt clearing sessions under the guidance of expert faculties
- ◆ Get tips & trick along with sample papers

Course Fee : ₹ 20,000

