



**JEE  
MAIN  
MARCH  
2021**

17<sup>th</sup> March 2021 | Shift - 1  
MATHEMATICS

**JEE | NEET | Foundation**

**MOTION™**

**25000+**  
SELECTIONS SINCE 2007

**SECTION – A**

1. Which of the following is true for  $y(x)$  that satisfies the differential equation

$$\frac{dy}{dx} = xy - 1 + x - y; y(0) = 0 :$$

(1)  $y(1) = 1$

(2)  $y(1) = e^{\frac{1}{2}} - 1$

(3)  $y(1) = e^{\frac{1}{2}} - e^{-\frac{1}{2}}$

(4)  $y(1) = e^{-\frac{1}{2}} - 1$

**Ans. (4)**

**Sol.**  $\frac{dy}{dx} = (x - 1)y + (x - 1)$

$$\frac{dy}{dx} = (x - 1)(y + 1)$$

$$\frac{dy}{y + 1} = (x - 1) dx$$

$$\ln(y + 1) = \frac{x^2}{2} - x + c$$

$$x = 0, y = 0$$

$$\Rightarrow c = 0$$

$$\therefore \ln(y + 1) = \frac{x^2}{2} - x$$

$$\text{putting } x = 1, \ln(y + 1) = \frac{1}{2} - 1 = -\frac{1}{2}$$

$$y + 1 = e^{-\frac{1}{2}}$$

$$y = e^{-\frac{1}{2}} - 1$$

$$\therefore y(1) = e^{-\frac{1}{2}} - 1$$

**Toll Free : 1800-212-1799**

**www.motion.ac.in | Email : info@motion.ac.in**

2. The system of equations  $kx + y + z = 1$ ,  $x + ky + z = k$  and  $x + y + zk = k^2$  has no solution if  $k$  is equal to:

- (1) -2
- (2) -1
- (3) 1
- (4) 0

Ans. (1)

Sol.  $D = \begin{vmatrix} k & 1 & 1 \\ 1 & k & 1 \\ 1 & 1 & k \end{vmatrix} = 0$

$$\Rightarrow k(k^2 - 1) - (k - 1) + (1 - k) = 0$$

$$\Rightarrow (k - 1)(k^2 + k - 1 - 1) = 0$$

$$\Rightarrow (k - 1)(k^2 + k - 2) = 0$$

$$\Rightarrow (k - 1)(k - 1)(k + 2) = 0$$

$$\Rightarrow k = 1, k = 2$$

for  $k = 1$  equation identical so  $k = -2$  for no solution.

3. The value of  $4 + \frac{1}{5 + \frac{1}{4 + \frac{1}{5 + \frac{1}{4 + \dots \infty}}}}$  is:

(1)  $2 + \frac{4}{\sqrt{5}}\sqrt{30}$

(2)  $4 + \frac{4}{\sqrt{5}}\sqrt{30}$

(3)  $2 + \frac{2}{5}\sqrt{30}$

(4)  $5 + \frac{2}{5}\sqrt{30}$

Ans. (3)

Sol.  $y = 4 + \frac{1}{5 + \frac{1}{y}}$

$$\Rightarrow y = 4 + \frac{y}{5y + 1}$$

$$\Rightarrow 5y^2 - 20y - 4 = 0$$

$$\Rightarrow y = \frac{20 \pm \sqrt{400 + 80}}{10}$$

$$\Rightarrow y = \frac{20 \pm 4\sqrt{30}}{10}, y > 0$$

$$y = \frac{10 + 2\sqrt{30}}{5}$$

4. If the Boolean expression  $(p \Rightarrow q) \Leftrightarrow (q * (\sim P))$  is a tautology, then the Boolean expression  $p * (\sim q)$  is equivalent to:
- (1)  $p \Rightarrow \sim q$
  - (2)  $p \Rightarrow q$
  - (3)  $q \Rightarrow p$
  - (4)  $\sim q \Rightarrow p$

**Ans. (3)**

**Sol.**  $(p \rightarrow q) \Leftrightarrow (q * \sim P)$

P	q	$p \rightarrow q$	$q * \sim P$	$\sim q$	$\sim q \wedge p$	$\sim(\sim q \wedge p)$
T	T	T	T	F	F	T
T	F	F	F	T	T	F
F	T	T	T	F	F	T
F	F	T	T	T	F	T

$$\begin{aligned} \therefore \sim(\sim q \wedge p) &= q \vee \sim p \\ &= \sim p \vee q \end{aligned}$$

$\therefore *$  is equivalent to  $\vee$

$$\begin{aligned} \therefore p * \sim q &= p \vee \sim q \\ &= \sim q \vee p \\ &= q \rightarrow p \end{aligned}$$

5. Choose the incorrect statement about the two circles whose equations are given below:  
 $x^2 + y^2 - 10x - 10y + 41 = 0$  and  
 $x^2 + y^2 - 16x - 10y + 80 = 0$
- (1) Distance between two centres is the average of radii of both the circles.
  - (2) Circles have two intersection points.
  - (3) Both circles' centres lie inside region of one another.
  - (4) Both circles pass through the centre of each other.

**Ans. (3)**

**Sol.**  $C_1(5, 5), C_2(8, 5)$   
 position of  $C_1(5, 5)$  in  $S_2 = 0$   
 $= 25 + 25 - 80 - 50 + 80$   
 $= 0$   
 position of  $C_2(8, 5)$  in  $S_1 = 0$   
 $= 64 + 25 - 80 - 50 + 41$   
 $= 0$

**Toll Free : 1800-212-1799**

www.motion.ac.in | Email : info@motion.ac.in

6. The sum of possible values of  $x$  for  $\tan^{-1}(x+1) + \cot^{-1}\left(\frac{1}{x-1}\right) = \tan^{-1}\left(\frac{8}{31}\right)$  is:

(1)  $-\frac{33}{4}$

(2)  $-\frac{32}{4}$

(3)  $-\frac{31}{4}$

(4)  $-\frac{30}{4}$

Ans. (2)

Sol. Taking tan both sides

$$\frac{(1+x) + (x-1)}{1 - (1+x)(x-1)} = \frac{8}{31}$$

$$\Rightarrow \frac{2x}{2-x^2} = \frac{8}{31}$$

$$\Rightarrow 4x^2 + 31x - 8 = 0$$

$$\Rightarrow x = -8, \frac{1}{4}$$

but at  $x = \frac{1}{4}$

$$\text{LHS} > \frac{\pi}{2} \text{ and RHS} < \frac{\pi}{2}$$

So, only solution is  $x = -8$

7. Let  $\vec{a} = 2\hat{i} - 3\hat{j} + 4\hat{k}$  and  $\vec{b} = 7\hat{i} + \hat{j} - 6\hat{k}$

If  $\vec{r} \times \vec{a} = \vec{r} \times \vec{b}$ ,  $\vec{r} \cdot (\hat{i} + 2\hat{j} + \hat{k}) = -3$ , then  $\vec{r} \cdot (2\hat{i} - 3\hat{j} + \hat{k})$  is equal to :

(1) 10

(2) 13

(3) 12

(4) 8

Ans. (3)

Sol.  $\vec{a} = (2, -3, 4)$  ,  $\vec{b} = (7, 1, -6)$

**Toll Free : 1800-212-1799**

www.motion.ac.in | Email : info@motion.ac.in

$$\vec{r} \times \vec{a} - \vec{r} \times \vec{b} = 0$$

$$\vec{r} \times (\vec{a} - \vec{b}) = 0$$

$$\vec{r} = \lambda (\vec{a} - \vec{b})$$

$$\vec{r} = \lambda (-5\hat{i} - 4\hat{j} + 10\hat{k})$$

$$\vec{r} \cdot (2, -3, 1) = ?$$

$$\text{if } \vec{r} \cdot (1, 2, 1) = -3$$

$$\lambda(-5 - 8 + 10) = -3 \Rightarrow \lambda = 1$$

$$\therefore (-5, -4, 10) \cdot (2, -3, 1)$$

$$\Rightarrow -10 + 12 + 10 = 12$$

8. The equation of the plane which contains the y-axis and passes through the point (1, 2, 3) is:

(1)  $3x + z = 6$

(2)  $3x - z = 0$

(3)  $x + 3z = 10$

(4)  $x + 3z = 0$

Ans. (2)

Sol. Let the equation of the plane is  $a(x - 1) + b(y - 2) + c(z - 3) = 0$

Y-axis lies on it D.R.'s of y-axis are 0, 1, 0

$$\therefore 0 \cdot a + 1 \cdot b + 0 \cdot c = 0 \Rightarrow b = 0$$

$$\therefore \text{Equation of plane is } a(x - 1) + c(z - 3) = 0$$

$$x = 0, z = 0 \text{ also satisfy it } -a - 3c = 0 \Rightarrow a = -3c$$

$$-3c(x - 1) + c(z - 3) = 0$$

$$-3x + 3 + z - 3 = 0$$

$$3x - z = 0$$

9. If  $A = \begin{pmatrix} 0 & \sin \alpha \\ \sin \alpha & 0 \end{pmatrix}$  and  $\det \left( A^2 - \frac{1}{2} I \right) = 0$ , then a possible value of  $\alpha$  is:

(1)  $\frac{\pi}{6}$

(2)  $\frac{\pi}{2}$

(3)  $\frac{\pi}{3}$

(4)  $\frac{\pi}{4}$

Ans. (4)

**Toll Free : 1800-212-1799**

www.motion.ac.in | Email : info@motion.ac.in

# रिपिटर्स बैच का सर्वश्रेष्ठ परिणाम सिर्फ मोशन के साथ

# MOTION™

Sol.  $A^2 = \begin{bmatrix} 0 & \sin \alpha \\ \sin \alpha & 0 \end{bmatrix} \begin{bmatrix} 0 & \sin \alpha \\ \sin \alpha & 0 \end{bmatrix} = \begin{bmatrix} \sin^2 \alpha & 0 \\ 0 & \sin^2 \alpha \end{bmatrix}$

$$A^2 - \frac{1}{2}I = \begin{bmatrix} \sin^2 \alpha & 0 \\ 0 & \sin^2 \alpha \end{bmatrix} - \begin{bmatrix} \frac{1}{2} & 0 \\ 0 & \frac{1}{2} \end{bmatrix} = \begin{bmatrix} \sin^2 \alpha - \frac{1}{2} & 0 \\ 0 & \sin^2 \alpha - \frac{1}{2} \end{bmatrix}$$

$$\Rightarrow \left| A^2 - \frac{1}{2}I \right| = 0$$

$$\Rightarrow \begin{vmatrix} \sin^2 \alpha - \frac{1}{2} & 0 \\ 0 & \sin^2 \alpha - \frac{1}{2} \end{vmatrix} = 0$$

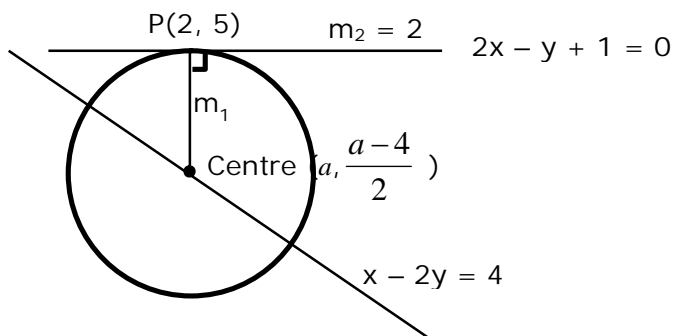
$$\Rightarrow \left( \sin^2 \alpha - \frac{1}{2} \right)^2 = 0 \Rightarrow \sin^2 \alpha = \frac{1}{2} \quad \Rightarrow \sin \alpha = \frac{1}{\sqrt{2}}, -\frac{1}{\sqrt{2}}$$

$$\alpha = \frac{\pi}{4}$$

10 The line  $2x - y + 1 = 0$  is a tangent to the circle at the point  $(2, 5)$  and the centre of the circle lies on  $x - 2y = 4$ . Then, the radius of the circle is:

- (1)  $4\sqrt{5}$
- (2)  $5\sqrt{3}$
- (3)  $3\sqrt{5}$
- (4)  $5\sqrt{4}$

Ans. (3)  
Sol.



$$m_1 \times m_2 = -1$$

$$\frac{a-4}{2} - 5$$

$$\frac{2}{a-2} \times 2 = -1$$

**Toll Free : 1800-212-1799**

www.motion.ac.in | Email : info@motion.ac.in

$$\frac{a-14}{a-2} = -1$$

$$a - 14 = 2 - a$$

$$2a = 16$$

$$\boxed{a = 8}$$

∴ Centre (8, 2)

$$\text{Radius} = \sqrt{36+9}$$

$$= \sqrt{45}$$

$$= 3\sqrt{5}$$

11. Team 'A' consists of 7 boys and n girls and Team 'B' has 4 boys and 6 girls. If a total of 52 single matches can be arranged between these two teams when a boy plays against a boy and a girl plays against a girl, then n is equal to:
- (1) 5
  - (2) 6
  - (3) 2
  - (4) 4

Ans. (4)

Sol.

$$7 \times 4 + 6 \times n = 52$$

$$6n = 24$$

$$\Rightarrow n = 4$$

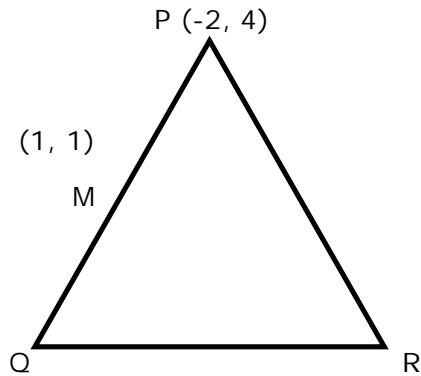
12. In a triangle PQR, the co-ordinates of the points P and Q are (-2, 4) and (4, -2) respectively. If the equation of the perpendicular bisector of PR is  $2x - y + 2 = 0$ , then the centre of the circumcircle of the  $\Delta PQR$  is:
- (1) (-2, -2)
  - (2) (0, 2)
  - (3) (-1, 0)
  - (4) (1, 4)

Ans. (1)

**Toll Free : 1800-212-1799**

www.motion.ac.in | Email : info@motion.ac.in





**Sol.**

(4, -2)

Perpendicular bisector of PR :  $2x - y + 2 = 0$  .....(1)

Mid-point of PQ  $\rightarrow M(1, 1)$

Equation of perpendicular bisector of PQ :  $x - y = 0$  .....(2)

$\therefore$  POI of equation (1) & (2) is circumcentre

So, circumcentre (-2,-2)

**13.** If  $\cot^{-1}(\alpha) = \cot^{-1} 2 + \cot^{-1} 8 + \cot^{-1} 18 + \cot^{-1} 32 + \dots$  upto 100 terms, then  $\alpha$  is:

- (1) 1.03
- (2) 1.00
- (3) 1.01
- (4) 1.02

**Ans.** (3)

**Sol.**  $RHS = \sum_{n=1}^{100} \cot^{-1} 2n^2 = \sum_{n=1}^{100} \tan^{-1} \left( \frac{2}{4n^2} \right)$

$$= \sum_{n=1}^{100} \tan^{-1} \left( \frac{(2n+1) - (2n-1)}{1 + (2n+1)(2n-1)} \right)$$

$$= \sum_{n=1}^{100} \tan^{-1} (2n+1) - \tan^{-1} (2n-1)$$

$$= \tan^{-1} 201 - \tan^{-1} 1$$

$$= \tan^{-1} \left( \frac{200}{202} \right)$$

$$\Rightarrow \cot^{-1} \alpha = \cot^{-1} \left( \frac{101}{100} \right)$$

$$\Rightarrow \alpha = 1.01$$

**14.** Which of the following statements is incorrect for the function  $g(\alpha)$  for  $\alpha \in \mathbb{R}$  such that

$$g(\alpha) = \int_{\frac{\pi}{6}}^{\frac{\pi}{3}} \frac{\sin^\alpha x}{\cos^\alpha x + \sin^\alpha x} dx$$

**Toll Free : 1800-212-1799**

www.motion.ac.in | Email : info@motion.ac.in

(1)  $g(\alpha)$  is a strictly decreasing function

(2)  $g(\alpha)$  has an inflection point at  $\alpha = -\frac{1}{2}$

(3)  $g(\alpha)$  is an even function

(4)  $g(\alpha)$  is a strictly increasing function.

**Ans. (1 OR 2 OR 3/Bonus)**

**Sol.**  $g(x) = \frac{\pi}{12}$  by applying prop.  $x \rightarrow a + b - x$ .

**15.** If the fourth term in the expansion of  $(x + x^{\log_2 x})^7$  is 4480, then the value of  $x$  where  $x \in \mathbb{N}$  is equal to:

(1) 4

(2) 3

(3) 2

(4) 1

**Ans. (3)**

**Sol.**  ${}^7C_3 x^4 (x^{\log_2 x})^3 = 4480$

$$\Rightarrow 35x^4 (x^{\log_2 x})^3 = 4480$$

$$\Rightarrow x^4 (x^{\log_2 x})^3 = 128$$

take log w.r.t base 2 we get  $4\log_2 x + 3\log_2 (x^{\log_2 x}) = \log_2 128$

Let  $\log_2 x = y$

$$4y + 3y^2 = 7$$

$$\Rightarrow y = 1, \frac{-7}{3}$$

$$\Rightarrow \log_2 x = 1, \frac{-7}{3}$$

$$x = 2, x = 2^{-7/3}$$

**16.** Two dices are rolled. If both dices have six faces numbered 1, 2, 3, 5, 7 and 11, then the probability that the sum of the numbers on the top faces is less than or equal to 8 is:

(1)  $\frac{17}{36}$

(2)  $\frac{4}{9}$

(3)  $\frac{5}{12}$

(4)  $\frac{1}{2}$

**Ans. (1)**

**Toll Free : 1800-212-1799**

www.motion.ac.in | Email : info@motion.ac.in

**Sol.**  $n(S) = 36$   
possible ordered pair ; (1, 1), (1, 2), (1, 3), (1, 5), (1, 7), (2, 1), (2, 2), (2, 3), (2, 5), (3, 1), (3, 2), (3, 3), (3, 5), (5, 1), (5, 2), (5, 3), (7, 1)  
Number of ordered pair = 17  
Probability =  $\frac{17}{36}$

**17.** The inverse of  $y = 5^{\log x}$  is:

(1)  $x = 5^{\log y}$

(2)  $x = y^{\log 5}$

(3)  $x = y^{\frac{1}{\log 5}}$

(4)  $x = 5^{\frac{1}{\log y}}$

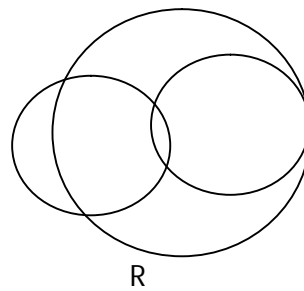
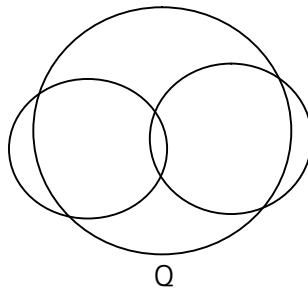
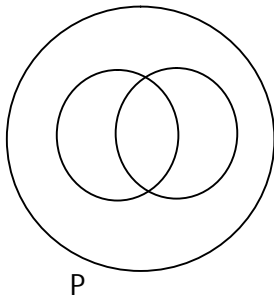
**Ans. (3)**

**Sol.**  $y = 5^{\log_e x}$

$$\log_5 y = \log_e x$$

$$x = e^{\log_5 y}$$

**18.** In a school, there are three types of games to be played. Some of the students play two types of games, but none play all the three games. Which Venn diagrams can justify the above statements.



- (1) P and R
- (2) P and Q
- (3) None of these
- (4) Q and R

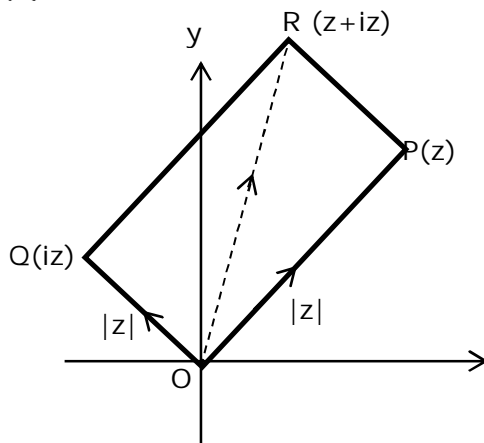
**Ans. (3)**

**Sol.** In are the (A), (B), (C) there are some students which play all the three games hence no venn diagram is correct.

19. The area of the triangle with vertices A(z), B(iz) and C(z+iz) is:

- (1)  $\frac{1}{2}|z + iz|^2$
- (2) 1
- (3)  $\frac{1}{2}$
- (4)  $\frac{1}{2}|z|^2$

Ans. (4)



Sol.

$$\begin{aligned} \text{Area of } \Delta &= \frac{1}{2} (\text{area of square}) \\ &= \frac{1}{2} |z|^2 \end{aligned}$$

20. The value of  $\lim_{x \rightarrow 0^+} \frac{\cos^{-1}(x - [x]^2) \cdot \sin^{-1}(x - [x]^2)}{x - x^3}$ , where  $[x]$  denotes the greatest integer  $\leq$

x is :

- (1) 0
- (2)  $\frac{\pi}{4}$
- (3)  $\frac{\pi}{2}$
- (4)  $\pi$

Ans. (3)

Sol. 
$$\lim_{x \rightarrow 0^+} \frac{\cos^{-1}(x - [x]^2) \sin^{-1}(x - [x]^2)}{x(1 - x^2)}$$

$$\Rightarrow \lim_{x \rightarrow 0^+} \frac{\cos^{-1} x \sin^{-1} x}{x} = \frac{\pi}{2}$$

**Toll Free : 1800-212-1799**

www.motion.ac.in | Email : info@motion.ac.in

**SECTION - B**

1. Let there be three independent events  $E_1$ ,  $E_2$  and  $E_3$ . The probability that only  $E_1$  occurs is  $\alpha$ , only  $E_2$  occurs is  $\beta$  and only  $E_3$  occurs is  $\gamma$ . Let 'p' denote the probability of none of events occurs that satisfies the equations  $(\alpha - 2\beta)p = \alpha\beta$  and  $(\beta - 3\gamma)p = 2\beta\gamma$ . All the given probabilities are assumed to lie in the interval (0, 1)

Then,  $\frac{\text{Pr obability of occurrence of } E_1}{\text{Pr obability of occurrence of } E_3}$  is equal to \_\_\_\_\_.

**Ans. (6)**

**Sol.** Let x, y, z be probability of  $E_1$ ,  $E_2$ ,  $E_3$  respectively

$$\Rightarrow x(1-y)(1-z) = \alpha \Rightarrow y(1-x)(1-z) = \beta \Rightarrow z(1-x)(1-y) = \gamma \Rightarrow (1-x)(1-y)(1-z) = P$$

Putting in the given relation we get  $x = 2y$  and  $y = 3z \Rightarrow x = 6z \Rightarrow \frac{x}{z} = 6$

2. If the equation of the plane passing through the line of intersection of the planes  $2x-7y+4z-3=0$ ,  $3x-5y+4z+11=0$  and the point  $(-2, 1, 3)$  is  $ax+by+cz-7=0$ , then the value of  $2a+b+c-7$  is \_\_\_\_\_.

**Ans. (4)**

**Sol.**

Equation of plane can be written using family of planes:  $P_1 + \lambda P_2 = 0$

$$(2x - 7y + 4z - 3) + \lambda (3x - 5y + 4z + 11) = 0$$

It passes through  $(-2, 1, 3)$

$$\therefore (-4 + 7 + 12 - 3) + \lambda (-6 - 5 + 12 + 11) = 0$$

$$-2 + \lambda(12) = 0$$

$$\lambda = \frac{1}{6}$$

$$\therefore 12x - 42y + 24z - 18 + 3x - 5y + 4z + 11 = 0$$

$$15x - 47y + 28z - 7 = 0$$

$$a = 15, b = -47, c = 28$$

$$\therefore 2a + b + c - 7 = 30 - 47 + 28 - 7 = 4$$

**Ans: 4**

3. If  $A = \begin{bmatrix} 2 & 3 \\ 0 & -1 \end{bmatrix}$ , then the value of  $\det(A^4) + \det(A^{10} - \text{Adj}(2A))^{10}$  is equal to \_\_\_\_\_.

**Ans. (16)**

**Sol.**  $|A| = -2 \Rightarrow |A|^4 = 16$

$$A^{10} = \begin{bmatrix} 2^{10} & 2^{10}-1 \\ 0 & 1 \end{bmatrix} = \begin{bmatrix} 1024 & 1023 \\ 0 & 1 \end{bmatrix}$$

**Toll Free : 1800-212-1799**

**www.motion.ac.in | Email : info@motion.ac.in**

$$2A = \begin{bmatrix} 4 & 6 \\ 0 & -2 \end{bmatrix}$$

$$\text{adj}(2A) = \begin{bmatrix} -2 & -6 \\ 0 & 4 \end{bmatrix}$$

$$\text{adj}(2A) = -2 \begin{bmatrix} 1 & 3 \\ 0 & -2 \end{bmatrix}$$

$$(\text{adj}(2A))^{10} = 2^{10} \begin{bmatrix} 1 & 3 \\ 0 & -2 \end{bmatrix}^{10}$$

$$= 2^{10} \begin{bmatrix} 1 & -(2^{10} - 1) \\ 0 & 2^{10} \end{bmatrix}$$

$$= 2^{10} \begin{bmatrix} 1 & -1023 \\ 0 & 1024 \end{bmatrix}$$

$$A^{10} - (\text{adj}(2A))^{10} = \begin{bmatrix} 0 & 2^{11} \times 1023 \\ 0 & 1 - (1024)^2 \end{bmatrix}$$

$$|A^{10} - \text{adj}(2A)^{10}| = 0$$

4. The minimum distance between any two points  $P_1$  and  $P_2$  while considering point  $P_1$  on one circle and point  $P_2$  on the other circle for the given circles' equations

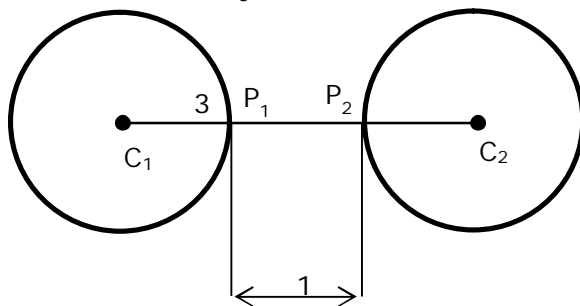
$$X^2 + y^2 - 10x - 10y + 41 = 0$$

$$X^2 + y^2 - 24x - 10y + 160 = 0$$

Ans. (1)

Sol.  $S_1 : (x - 5)^2 + (y - 5)^2 = 9$  centre  $(5, 5)$ ,  $r_1 = 3$

$S_2 : (x - 12)^2 + (y - 5)^2 = 9$  centre  $(12, 5)$ ,  $r_2 = 3$



So  $(P_1P_2)_{\min} = 1$

**Toll Free : 1800-212-1799**

www.motion.ac.in | Email : info@motion.ac.in

5. If  $(2021)^{3762}$  is divided by 17, then the remainder is \_\_\_\_\_.

Ans. (4)

Sol.  $(2021)^{3762} = (2023 - 2)^{3762} = \text{multiple of } 17 + 2^{3762}$   
 $= 17\lambda + 2^2 (2^4)^{940}$   
 $= 17\lambda + 4 (17 - 1)^{940}$   
 $= 17\lambda + 4 (17\mu + 1)$   
 $17k + 4; (k \in I)$   
 Remainder = 4

6. If  $[ \cdot ]$  represents the greatest integer function, then the value of  $\int_0^{\sqrt{\frac{\pi}{2}}} \left( [x^2] - \cos x \right) dx$  is \_\_\_\_\_.

Ans. (1)

Sol.

$$\begin{aligned} & \int_0^{\sqrt{\frac{\pi}{2}}} \left( [x^2] - \cos x \right) dx \\ &= \int_0^1 [-\cos x] dx + \int_1^{\sqrt{\frac{\pi}{2}}} [1 - \cos x] dx \\ &= \int_0^1 -1 - [\cos x] dx + \int_1^{\sqrt{\frac{\pi}{2}}} dx + \int_1^{\sqrt{\frac{\pi}{2}}} -1 - [\cos x] dx \\ &= -\int_0^1 dx + \int_1^{\sqrt{\frac{\pi}{2}}} dx - \int_1^{\sqrt{\frac{\pi}{2}}} dx \\ &= -(x)_0^1 = -1 \\ &\therefore \boxed{\text{Ans: 1}} \end{aligned}$$

7. If  $f(x) = \sin \left( \cos^{-1} \left( \frac{1 - 2^{2x}}{1 + 2^{2x}} \right) \right)$  and its first derivative with respect to  $x$  is  $-\frac{b}{a} \log_e 2$  when  $x = 1$ , where  $a$  and  $b$  are integers, then the minimum value of  $|a^2 - b^2|$  is \_\_\_\_\_.

Ans. (481)

Sol.

$$\cos^{-1} \left( \frac{1 - 4^x}{1 + 4^x} \right) \quad \text{Let } 2^x = t > 0$$

**Toll Free : 1800-212-1799**

www.motion.ac.in | Email : info@motion.ac.in

$$\cos^{-1}\left(\frac{1-t^2}{1+t^2}\right) \quad t > 0$$

$$t = \tan \theta$$

$$\cos^{-1}(\cos 2\theta) \quad \theta \in \left(0, \frac{\pi}{2}\right)$$

$$2\theta \in (0, \pi)$$

$$\Rightarrow 2\theta$$

$$\therefore \sin \left\{ \cos^{-1} \left( \frac{1-4^x}{1+4^x} \right) \right\}$$

$$= \sin 2\theta$$

$$y = \frac{2 \tan \theta}{1 + \tan^2 \theta} = \frac{2t}{1+t^2} = \frac{2 \cdot 2^x}{1+4^x}$$

$$\therefore \frac{dy}{dx} = \frac{(1+4^x) \cdot 2 \cdot 2^x \ln 2 - 2 \cdot 2^x (4^x) \cdot \ln 4}{(1+4^x)^2}$$

$$\frac{dy}{dx} = \frac{5 \cdot 2 \cdot 2 \cdot \ln 2 - 2 \cdot 2 \cdot 4 \cdot 2 \ln 2}{25}$$

$$= \frac{20 \ln 2 - 32 \ln 2}{25} = \frac{-12 \ln 2}{25}$$

$$a=25, b=12$$

$$\therefore |a^2 - b^2|_{\min} = |25^2 - 12^2|$$

$$= (481)$$

8. If the function  $f(x) = \frac{\cos(\sin x) - \cos x}{x^4}$  is continuous at each point in its domain and

$$f(0) = \frac{1}{k}, \text{ then } k \text{ is } \underline{\hspace{2cm}}.$$

Ans. (6)

$$\text{Sol. } \frac{1}{k} = \lim_{x \rightarrow 0} \frac{2 \sin\left(\frac{\sin x + x}{2}\right) \sin\left(\frac{x - \sin x}{2}\right)}{x^4}$$

$$= \lim_{x \rightarrow 0} \frac{(\sin x + x)(x - \sin x)}{2x^4} = \left( \lim_{x \rightarrow 0} \frac{\sin x + x}{2x} \right) \left( \lim_{x \rightarrow 0} \frac{x - \sin x}{x^3} \right)$$

$$= 1 \times \lim_{x \rightarrow 0} \frac{1 - \cos x}{3x^2} = \frac{1}{6}$$

**Toll Free : 1800-212-1799**

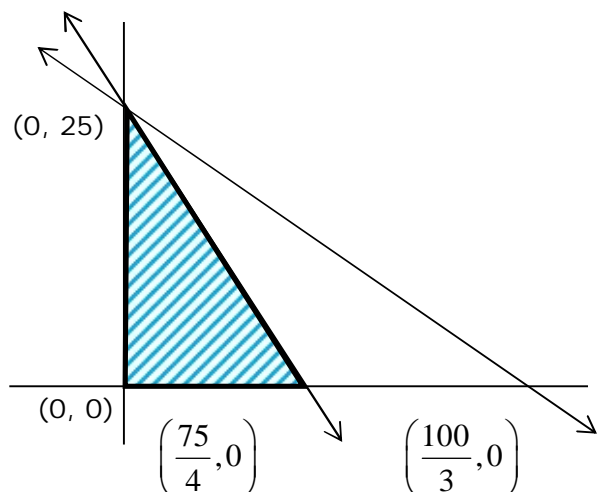
www.motion.ac.in | Email : info@motion.ac.in



9. The maximum value of  $z$  in the following equation  $z = 6xy + y^2$ , where  $3x + 4y \leq 100$  and  $4x + 3y \leq 75$  for  $x \geq 0$  and  $y \geq 0$  is \_\_\_\_\_.

Ans. (625)

Sol.  $x \geq 0, y \geq 0$   
 $4x + 3y \leq 75$   
 $3x + 4y \leq 100$



$(x, y)$	$z = 6xy + y^2$
$(0, 25)$	$z = 0 + 625 = 625$
$(\frac{75}{4}, 0)$	$z = 0 + 0 = 0$
$(0, 0)$	$z = 0 + 0 = 0$

$z_{\max} = 625$  at  $x = 0, y = 25$

10. If  $\vec{a} = \alpha \hat{i} + \beta \hat{j} + 3\hat{k}$ ,  
 $\vec{b} = -\beta \hat{i} - \alpha \hat{j} - \hat{k}$  and  
 $\vec{c} = \hat{i} - 2\hat{j} - \hat{k}$

such that  $\vec{a} \cdot \vec{b} = 1$  and  $\vec{b} \cdot \vec{c} = -3$ , then  $\frac{1}{3}((\vec{a} \times \vec{b}) \cdot \vec{c})$  is equal to \_\_\_\_\_.

Ans. (2)

Sol.  $\vec{a} = (\alpha, \beta, 3)$        $\vec{b} = (-\beta, -\alpha, -1)$

$\vec{c} = (1, -2, -1)$

•  $\vec{a} \cdot \vec{b} = 1 \Rightarrow (-\alpha\beta - \alpha\beta - 3) = 1$

$-2\alpha\beta = 4$

$\alpha\beta = -2$

- $\vec{b} \cdot \vec{c} = -3$   
 $-\beta + 2\alpha + 1 = -3$

$$\boxed{2\alpha - \beta = -4} \quad \therefore \begin{cases} \alpha = -1 \\ \beta = 2 \end{cases}$$

$$\vec{a} = (-1, 2, 3) \quad \vec{b} = (-2, 1, -1)$$

$$\therefore \vec{a} \times \vec{b} = \begin{vmatrix} \hat{i} & \hat{j} & \hat{k} \\ -1 & 2 & 3 \\ -2 & 1 & -1 \end{vmatrix} = \hat{i}(-5) - \hat{j}(7) + \hat{k}(3) = (-5, -7, 3)$$

$$\begin{aligned} \therefore (\vec{a} \times \vec{b}) \cdot \vec{c} &= (-5, -7, 3) \cdot (1, -2, -1) \\ &= (-5 + 14 - 3) = 6 \end{aligned}$$

**Toll Free : 1800-212-1799**

www.motion.ac.in | Email : info@motion.ac.in

रिपिटर्स बैच का सर्वश्रेष्ठ परिणाम  
सिर्फ मोशन के साथ

MOTION™

Another opportunity to  
strengthen your preparation

## UNNATI CRASH COURSE

JEE Main May 2021  
at Kota Classroom

- ◆ 40 Classes of each subjects
- ◆ Doubt Clearing sessions by Expert faculties
- ◆ Full Syllabus Tests to improve your question solving skills
- ◆ Thorough learning of concepts with regular classes
- ◆ Get tips & trick along with sample papers

Course Fee : ₹ 20,000



Start your JEE Advanced 2021  
Preparation with

## UTTHAN CRASH COURSE

at Kota Classroom

- ◆ Complete course coverage
- ◆ 55 Classes of each subject
- ◆ 17 Full & 6 Part syllabus tests will strengthen your exam endurance
- ◆ Doubt clearing sessions under the guidance of expert faculties
- ◆ Get tips & trick along with sample papers

Course Fee : ₹ 20,000

