


हमारा विश्वास... हर एक विद्यार्थी है स्वास

**JEE
MAIN
JAN
2020**

PAPER WITH SOLUTION

7th January 2020 _ SHIFT - II

MATHEMATICS



24000+
SELECTIONS SINCE 2007

JEE (Advanced)

5392

(Under 50000 Rank)

JEE (Main)

16241

NEET / AIIMS

1305

(since 2016)

NTSE / OLYMPIADS

1158

(5th to 10th class)

MOTION™

Nurturing potential through education

H.O. : 394, Rajeev Gandhi Nagar, Kota

www.motion.ac.in | ✉: info@motion.ac.in

1. The value of α for which $4\alpha \int_{-1}^2 e^{-\alpha|x|} dx = 5$, is:

α का वह मान, जिसके लिए $4\alpha \int_{-1}^2 e^{-\alpha|x|} dx = 5$, है, है:

- (1) $\log_e 2$ (2) $\log_e \sqrt{2}$ (3) $\log_e \left(\frac{4}{3}\right)$ (4) $\log_e \left(\frac{3}{2}\right)$

Sol. 1

$$4\alpha \left\{ \int_{-1}^0 e^{\alpha x} dx + \int_0^2 e^{-\alpha x} dx \right\} = 5$$

$$\Rightarrow 4\alpha \left\{ \left(\frac{e^{\alpha x}}{\alpha} \right)_{-1}^0 + \left(\frac{e^{-\alpha x}}{-\alpha} \right)_0^2 \right\} = 5$$

$$\Rightarrow 4\alpha \left\{ \left(\frac{1 - e^{-\alpha}}{\alpha} \right) - \left(\frac{e^{-2\alpha} - 1}{\alpha} \right) \right\} = 5$$

$$\Rightarrow 4(2 - e^{-\alpha} - e^{-2\alpha}) = 5 \text{ Put } e^{-\alpha} = t$$

$$\Rightarrow 4t^2 + 4t - 3 = 0$$

$$\Rightarrow (2t + 3)(2t - 1) = 0$$

$$\Rightarrow e^{-\alpha} = \frac{1}{2}$$

$$\Rightarrow \alpha = \ln 2$$

2. The number of ordered pairs (r, k) for which $6 \cdot {}^{35}C_r = (k^2 - 3) \cdot {}^{36}C_{r+1}$, where k is an integer, is:
क्रमित युग्मों (r, k) , जिनके लिए $6 \cdot {}^{35}C_r = (k^2 - 3) \cdot {}^{36}C_{r+1}$, जहाँ k एक पूर्णांक है, की संख्या है :

- (1) 6 (2) 3 (3) 4 (4) 2

Sol. 3

$$\frac{36}{r+1} \times \frac{35}{C_r} (k^2 - 3) = \frac{35}{C_r}$$

$$k^2 - 3 = \frac{r+1}{6} \Rightarrow k^2 = 3 + \frac{r+1}{6}$$

r can be 5, 35

for $r = 5$, $k = \pm 2$

$r = 35$, $k = \pm 3$

Hence number of order pair = 4

3. In a workshop, there are five machines and the probability of any one of them to be out of service on a day is $\frac{1}{4}$. If the probability that at most two machines will be out of service on the same day

is $\left(\frac{3}{4}\right)^k$, then k is equal to:

एक कार्यशाला में पाँच मशीनें हैं तथा उनमें से एक दिन किसी एक के खराब होने की प्रायिकता $\frac{1}{4}$ है। यदि किसी एक दिन

अधिकतम दो मशीन खराब होने की प्रायिकता $\left(\frac{3}{4}\right)^k$ है, तो k बराबर है :

24000+
SELECTIONS SINCE 2007

JEE (Advanced)	JEE (Main)	NEET / AIIMS	NTSE / OLYMPIADS
5392	16241	1305	1158
(Under 50000 Rank)	(since 2016)	(5th to 10th class)	

H.O. : 394, Rajeev Gandhi Nagar, Kota
Toll Free : 1800-212-1799
www.motion.ac.in | info@motion.ac.in

(1) $\frac{17}{4}$

(2) $\frac{17}{2}$

(3) 4

(4) $\frac{17}{8}$

Sol. 4

Required probability = when no. machine has fault + when only one machine has fault + when only two machines have fault.

$$= {}^5C_0 \left(\frac{3}{4}\right)^5 + {}^5C_1 \left(\frac{1}{4}\right) \left(\frac{3}{4}\right)^4 + {}^5C_2 \left(\frac{1}{4}\right)^2 \left(\frac{3}{4}\right)^3$$

$$= \frac{243}{1024} + \frac{405}{1024} + \frac{270}{1024} = \frac{918}{1024} = \frac{459}{512} = \frac{27 \times 17}{64 \times 8}$$

$$= \left(\frac{3}{4}\right)^3 \times k = \left(\frac{3}{4}\right)^3 \times \frac{17}{8}$$

$\therefore k = \frac{17}{8}$

4. If $3x + 4y = 12\sqrt{2}$ is a tangent to the ellipse $\frac{x^2}{a^2} + \frac{y^2}{9} = 1$ for some $a \in R$, then the distance between the foci of the ellipse is:

यदि किसी $a \in R$ के लिए दीर्घवृत्त $\frac{x^2}{a^2} + \frac{y^2}{9} = 1$ की एक स्पर्श रेखा $3x + 4y = 12\sqrt{2}$ है, तो दीर्घवृत्त की नाभियों के बीच की दूरी है :

(1) $2\sqrt{5}$

(2) $2\sqrt{7}$

(3) $2\sqrt{2}$

(4) 4

Sol. 2

$$3x + 4y = 12\sqrt{2}$$

$$\Rightarrow 4y = -3x + 12\sqrt{2}$$

$$\Rightarrow y = -\frac{3}{4}x + 3\sqrt{2}$$

condition of tangency $c^2 = a^2m^2 + b^2$

$$18 = a^2 \cdot \frac{9}{16} + 9$$

$$a^2 \cdot \frac{9}{16} = 9$$

$$a^2 = 16$$

$$a = 4$$

$$e = \sqrt{1 - \frac{b^2}{a^2}} = \sqrt{1 - \frac{9}{16}} = \sqrt{\frac{7}{16}}$$

**Increase Your Score
for JEE Main April'2020**

उत्कर्ष
15 JAN 2020

percentile between 97.0 to 98.99
in JEE Main (Jan-2020)

Fees - ₹ 22000 Including GST

उन्नति
17 JAN 2020

Below 97 percentile in JEE Main (Jan-2020)

Tenure: 62 Days | Schedule: 5 Classes Per Day

Fees - ₹ 27500 Including GST

उत्थान
17 JAN 2020

99 percentile and above
in JEE Main (Jan-2020)

Fees - ₹ 11000
score 160-200

Fees - ₹ 5500
score 200-240

Fees - ₹ 0
score above 240

$$\therefore ae = \sqrt{\frac{7}{16}} \cdot 4 = \sqrt{7}$$

$$\therefore \text{focus are } (\pm\sqrt{7}, 0)$$

$$\therefore \text{distance between foci} = 2\sqrt{7}$$

5. The coefficient of x^7 in the expression $(1+x)^{10} + x(1+x)^9 + x^2(1+x)^8 + \dots + x^{10}$ is:
 व्यंजक $(1+x)^{10} + x(1+x)^9 + x^2(1+x)^8 + \dots + x^{10}$ में x^7 का गुणांक है :
 (1) 420 (2) 210 (3) 330 (4) 120

Sol. 3

$$\frac{(1+x)^{10} \left[1 - \left(\frac{x}{1+x} \right)^{11} \right]}{\left(1 - \frac{x}{1+x} \right)}$$

$$\frac{(1+x)^{10} | (1+x)^{11} - x^{11} |}{(1+x)^{11} \times \frac{1}{(1+x)}}$$

$$= (1+x)^{11} - x^{11}$$

coefficient of x^7 is ${}^{11}C_7 = {}^{11}C_4 = 330$

6. Let a_1, a_2, a_3, \dots be a G.P. such that $a_1 < 0, a_1 + a_2 = 4$ and $a_3 + a_4 = 16$. If $\sum_{i=1}^9 a_i = 4\lambda$, then λ is equal to:

माना a_1, a_2, a_3, \dots गुणोत्तर श्रेणी इस प्रकार है कि $a_1 < 0, a_1 + a_2 = 4$ तथा $a_3 + a_4 = 16$. यदि $\sum_{i=1}^9 a_i = 4\lambda$ है, तो λ बराबर है :

- (1) $\frac{511}{3}$ (2) -171 (3) 171 (4) -513

Sol. 2

$$a_1 + a_2 = 4 \Rightarrow a_1 + a_1 r = 4 \quad \dots(i)$$

$$a_3 + a_4 = 16 \Rightarrow a_1 r^2 + a_1 r^2 = 16 \quad \dots(ii)$$

$$\frac{1}{r^2} + \frac{1}{4} \Rightarrow r^2 = 4$$

$$r = \pm 2$$

$$r = 2, a_1(1+2) = 4 \Rightarrow a_1 = \frac{4}{3}$$

$$r = -2, a_1(1-2) = 4 \Rightarrow a_1 = -4$$

$$\sum_{i=1}^9 a_i = \frac{a_1(r^9 - 1)}{r - 1} = \frac{(-4)((-2)^9 - 1)}{-2 - 1} = \frac{4}{3}(-513) = 4\lambda$$

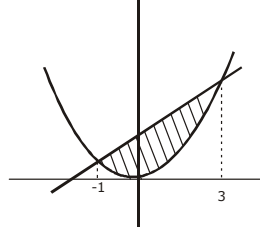
$$\lambda = -171$$

7. The area (in sq. units) of the region $\{(x, y) \in \mathbb{R}^2 \mid 4x^2 \leq y \leq 8x + 12\}$ is :
क्षेत्र $\{(x, y) \in \mathbb{R}^2 \mid 4x^2 \leq y \leq 8x + 12\}$ का क्षेत्रफल (वर्ग इकाइयों में) है :

- (1) $\frac{125}{3}$ (2) $\frac{124}{3}$ (3) $\frac{128}{3}$ (4) $\frac{127}{3}$

Sol. 3

$$\begin{aligned} 4x^2 &= y \\ y &= 8x + 12 \\ 4x^2 &= 8x + 12 \\ x^2 - 3x + x - 3 &= 0 \\ (x + 1)(x - 3) &= 0 \end{aligned}$$



$$A = \int_{-1}^3 (8x + 12 - 4x^2) dx$$

$$\begin{aligned} A &= \left. \frac{8x^2}{2} + 12x - \frac{4x^3}{3} \right|_{-1}^3 = (4(9) + 36 - 36) - \left(4 - 12 + \frac{4}{3} \right) = 36 + 8 - \frac{4}{3} \\ &= 44 - \frac{4}{3} = \frac{132 - 4}{3} = \frac{128}{3} \end{aligned}$$

8. Let \vec{a} , \vec{b} and \vec{c} be three unit vectors such that $\vec{a} + \vec{b} + \vec{c} = \vec{0}$. If $\lambda = \vec{a} \cdot \vec{b} + \vec{b} \cdot \vec{c} + \vec{c} \cdot \vec{a}$ and $\vec{d} = \vec{a} \times \vec{b} + \vec{b} \times \vec{c} + \vec{c} \times \vec{a}$, then the ordered pair, (λ, \vec{d}) is equal to:
माना \vec{a} , \vec{b} तथा \vec{c} तीन मात्रक (unit) सदिश इस प्रकार है कि $\vec{a} + \vec{b} + \vec{c} = \vec{0}$. यदि $\lambda = \vec{a} \cdot \vec{b} + \vec{b} \cdot \vec{c} + \vec{c} \cdot \vec{a}$ तथा $\vec{d} = \vec{a} \times \vec{b} + \vec{b} \times \vec{c} + \vec{c} \times \vec{a}$, तो क्रमित युग्म, (λ, \vec{d}) बराबर है :

- (1) $\left(-\frac{3}{2}, 3\vec{c} \times \vec{b}\right)$ (2) $\left(\frac{3}{2}, 3\vec{a} \times \vec{c}\right)$ (3) $\left(-\frac{3}{2}, 3\vec{a} \times \vec{b}\right)$ (4) $\left(\frac{3}{2}, 3\vec{b} \times \vec{c}\right)$

Sol. 3

$$|\vec{a} + \vec{b} + \vec{c}|^2 = 0$$

$$3 + 2(\vec{a} \cdot \vec{b} + \vec{b} \cdot \vec{c} + \vec{c} \cdot \vec{a}) = 0$$

$$\Rightarrow \lambda = \frac{-3}{2}$$

$$\vec{d} = \vec{a} \times \vec{b} + \vec{b} \times (-\vec{a} - \vec{b}) + (-\vec{a} - \vec{b}) \times \vec{a}$$

$$= \vec{a} \times \vec{b} + \vec{a} \times \vec{b} + \vec{a} \times \vec{b}$$

$$\vec{d} = 3(\vec{a} \times \vec{b})$$

**Increase Your Score
for JEE Main April'2020**

उत्कर्ष
15 JAN 2020

percentile between 97.0 to 98.99
in JEE Main (Jan-2020)

Fees - ₹ 22000 Including GST

उन्नति
17 JAN 2020

Below 97 percentile in JEE Main (Jan-2020)

Tenure: 62 Days | Schedule: 5 Classes Per Day

Fees - ₹ 27500 Including GST

उत्थान
17 JAN 2020

99 percentile and above
in JEE Main (Jan-2020)

Fees - ₹ 11000
score 160-200

Fees - ₹ 5500
score 200-240

Fees - ₹ 0
score above 240

9. Let α and β be the roots of the equation $x^2 - x - 1 = 0$. If $p_k = (\alpha)^k + (\beta)^k$, $k \geq 1$, then which one of the following statements is not true?

माना α तथा β समीकरण $x^2 - x - 1 = 0$ के मूल हैं। यदि $p_k = (\alpha)^k + (\beta)^k$, $k \geq 1$, तो निम्न में से कौन सा एक कथन सत्य नहीं है ?

- (1) $p_5 = p_2 \cdot p_3$ (2) $p_3 = p_5 - p_4$ (3) $(p_1 + p_2 + p_3 + p_4 + p_5) = 26$ (4) $p_5 = 11$

Sol. 1

$$\alpha^5 = 5\alpha + 3$$

$$\beta^5 = 5\beta + 3$$

$$P_5 = 5(\alpha + \beta) + 6$$

$$= 5(1) + 6$$

$$P_5 = 11 \text{ and } P_5 = \alpha^2 + \beta^2 = \alpha + 1 + \beta + 1$$

$$P_2 = 3 \text{ and } P_3 = \alpha^3 + \beta^3 = 2\alpha + 1 + 2\beta + 1 = 2(1) + 2 = 4$$

$$P_2 \times P_3 = 12 \text{ and } P_5 = 11$$

$$\Rightarrow P_5 \neq P_2 \times P_3$$

10. Let $A = [a_{ij}]$ and $B = [b_{ij}]$ be two 3×3 real matrices such that $b_{ij} = (3)^{(i+j-2)}a_{ij}$, where $i, j = 1, 2, 3$. If the determinant of B is 81, then the determinant of A is:

माना $A = [a_{ij}]$ तथा $B = [b_{ij}]$, 3×3 के दो वास्तविक आव्यूह इस प्रकार हैं कि $b_{ij} = (3)^{(i+j-2)}a_{ij}$, जहाँ $i, j = 1, 2, 3$. यदि B का सारणिक 81 है, तो A का सारणिक है :

- (1) $1/3$ (2) 3 (3) $1/81$ (4) $1/9$

Sol. 4

$$|B| = \begin{vmatrix} b_{11} & b_{12} & b_{13} \\ b_{21} & b_{22} & b_{23} \\ b_{31} & b_{32} & b_{33} \end{vmatrix} = \begin{vmatrix} 3^0 a_{11} & 3^1 a_{11} & 3^2 a_{13} \\ 3^1 a_{21} & 3^2 a_{22} & 3^3 a_{23} \\ 3^2 a_{31} & 3^3 a_{32} & 3^4 a_{33} \end{vmatrix}$$

$$\Rightarrow 81 = 3^3 \cdot 3 \cdot 3^2 |A| \Rightarrow |A| = \frac{1}{9}$$

11. Let A, B, C and D be four non-empty sets. The contrapositive statement of "If $A \subseteq B$ and $B \subseteq D$, then $A \subseteq C$ " is:

- (1) If $A \not\subseteq C$, then $A \not\subseteq B$ or $B \not\subseteq D$ (2) If $A \subseteq C$, then $B \subset A$ or $D \subset B$
 (3) If $A \not\subseteq C$, then $A \not\subseteq B$ and $B \subseteq D$ (4) If $A \not\subseteq C$, then $A \subseteq B$ and $B \subseteq D$

माना A, B, C तथा D चार अरिक्त समुच्चय हैं। तो कथन "यदि $A \subseteq B$ तथा $B \subseteq D$, तो $A \subseteq C$ " का प्रतिधनात्मक कथन है :-

- (1) यदि $A \not\subseteq C$, तो $A \not\subseteq B$ अथवा $B \not\subseteq D$ (2) यदि $A \subseteq C$, तो $B \subset A$ अथवा $D \subset B$
 (3) यदि $A \not\subseteq C$, तो $A \not\subseteq B$ तथा $B \subseteq D$ (4) यदि $A \not\subseteq C$, तो $A \subseteq B$ तथा $B \subseteq D$

Sol. 1

$$\text{Let } P = A \subseteq B, Q = B \subseteq D, R = A \subseteq C$$

$$(P \wedge Q) \rightarrow R$$

$$\text{contrapositive is } \sim R \rightarrow \sim (P \wedge Q)$$

$$\sim R \rightarrow \sim P \vee \sim Q$$

12. Let $y = y(x)$ be the solution curve of the differential equation, $(y^2 - x) \frac{dy}{dx} = 1$, satisfying $y(0) = 1$.
1. This curve intersects the x-axis at a point whose abscissa is:

माना अवकल समीकरण $(y^2 - x) \frac{dy}{dx} = 1$ का हल वक्र $y = y(x)$, $y(0)=1$ को सन्तुष्ट करता है। यह वक्र x-अक्ष को जिस बिन्दु पर काटता है उसका भुज है।

- (1) $2 + e$ (2) $2 - e$ (3) $-e$ (4) 2

Sol. **2**

$$\frac{dy}{dx} + x = y^2$$

$$\text{I.F.} = e^{\int x dy} = e^{y^2}$$

$$x \cdot e^{y^2} = \int y^2 \cdot e^{y^2} \cdot dy$$

$$= y^2 \cdot e^{y^2} - \int 2y \cdot e^{y^2} \cdot dy$$

$$\Rightarrow y^2 e^{y^2} - 2(y \cdot e^{y^2} - e^{y^2}) + c$$

$$x \cdot e^{y^2} = y^2 e^{y^2} - 2y e^{y^2} + 2e^{y^2} + c$$

$$x = y^2 - 2y + 2 + c \cdot e^{-y^2}$$

$$x = 0, \quad y = 1$$

$$0 = 1 - 2 + 2 + \frac{c}{e}$$

$$c = -e$$

$$y = 0, \quad x = 0 - 0 + 2 + (-e)(e^{-0})$$

$$x = 2 - e$$

13. The locus of the mid-points of the perpendiculars drawn from points on the line, $x = 2y$ to the line $x = y$ is:

रेखा $x = 2y$ के बिन्दुओं से रेखा $x = y$ पर डाले गये लम्बों के मध्य बिन्दुओं का बिन्दुपथ है :

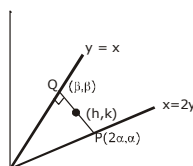
- (1) $7x - 5y = 0$ (2) $3x - 2y = 0$ (3) $5x - 7y = 0$ (4) $2x - 3y = 0$

Sol. **3**

$$\text{Slope of PQ} = \frac{k - \alpha}{h - 2\alpha} = -1$$

$$\Rightarrow k - \alpha = -h + 2\alpha$$

$$\Rightarrow \alpha = \frac{h+k}{3} \dots\dots(1)$$



$$\text{Also } 2h = 2\alpha + \beta$$

$$2k = \alpha + \beta$$

$$2h = \alpha + 2k$$

$$\Rightarrow \alpha = 2h - 2k \dots\dots(2)$$

from (1) & (2)

$$\frac{h+k}{3} = 2(h-k)$$

$$\text{So locus is } 6x - 6y = x + y \Rightarrow 5x = 7y$$

**Increase Your Score
for JEE Main April'2020**

उन्नति
17 JAN 2020

Below 97 percentile in JEE Main (Jan-2020)

Tenure: 62 Days | Schedule: 5 Classes Per Day

Fees - ₹ 27500 Including GST

उत्कर्ष
15 JAN 2020

percentile between 97.0 to 98.99
in JEE Main (Jan-2020)

Fees - ₹ 22000 Including GST

उत्थान
17 JAN 2020

99 percentile and above
in JEE Main (Jan-2020)

Fees - ₹ 11000 (score 160-200) | Fees - ₹ 5500 (score 200-240) | Fees - ₹ 0 (score above 240)

- 14.** If the sum of the first 40 terms of the series, $3 + 4 + 8 + 9 + 13 + 14 + 18 + 19 + \dots$ is: $(102)m$, then m is equal to
 यदि श्रेणी $3 + 4 + 8 + 9 + 13 + 14 + 18 + 19 + \dots$ के प्रथम 40 पदों का योगफल $(102)m$ है, तो m बराबर है
 (1) 10 (2) 20 (3) 25 (4) 5

Sol. 2

$$S = \underbrace{3+4} + \underbrace{8+9} + \underbrace{13+14} + \underbrace{18+19} + \dots + 40 \text{ term}$$

$$S = 7 + 17 + 27 + 37 + 47 + \dots + 20 \text{ term}$$

$$S_{40} = \frac{20}{2} [2 \times 7 + (19) 10] = 10[14+190] = 10[2040] = (102) (20)$$

$$\Rightarrow m = 20$$

- 15.** The value of c in the lagrange's mean value theorem for the function $f(x) = x^3 - 4x^2 + 8x + 11$, when $x \in [0, 1]$ is:

फलन $f(x) = x^3 - 4x^2 + 8x + 11, x \in [0, 1]$ के लिए लग्रांज मध्यमान प्रमेय में c का मान है:

(1) $\frac{\sqrt{7}-2}{3}$ (2) $\frac{4-\sqrt{7}}{3}$ (3) $\frac{4-\sqrt{5}}{3}$ (4) $\frac{2}{3}$

Sol. 2

$f(x)$ is a polynomial function

\therefore it is continuous and differentiable in $[0,1]$

Here $f(0) = 11, f(1) = 1 - 4 + 8 + 11 = 16$

$$f'(x) = 3x^2 - 8x + 8$$

$$\therefore f'(c) = \frac{f(1) - f(0)}{1 - 0} = \frac{16 - 11}{1} = 3c^2 - 8c + 8$$

$$\Rightarrow 3c^2 - 8c + 3 = 0$$

$$C = \frac{8 \pm 2\sqrt{7}}{6} = \frac{4 \pm \sqrt{7}}{3}$$

$$\therefore C = \frac{4 - \sqrt{7}}{3} \in (0, 1)$$

- 16.** Let the tangents drawn from the origin to the circle, $x^2 + y^2 - 8x - 4y + 16 = 0$ touch it at the points A and B. The $(AB)^2$ is equal to:

माना मूल बिन्दु से वृत्त $x^2 + y^2 - 8x - 4y + 16 = 0$ पर खींची गई स्पर्श रेखायें इसे बिन्दुओं A तथा B पर स्पर्श करती हैं। तो $(AB)^2$ बराबर है :

(1) $\frac{56}{5}$ (2) $\frac{52}{5}$ (3) $\frac{64}{5}$ (4) $\frac{32}{5}$

Sol. 3

$$L = \sqrt{S_1} = \sqrt{16} = 4$$

$$R = \sqrt{16 + 4 - 16} = 2$$

$$\text{Length of chord of contact} = \frac{2LR}{\sqrt{L^2 + R^2}} = \frac{2 \times 4 \times 2}{\sqrt{16 + 4}} = \frac{16}{\sqrt{20}}$$

$$\text{Square of length of chord of contact} = \frac{64}{5}$$

17. Let $y = y(x)$ be a function of x satisfying $y\sqrt{1-x^2} = k - x\sqrt{1-y^2}$ where k is a constant and

$y\left(\frac{1}{2}\right) = -\frac{1}{4}$. Then $\frac{dy}{dx}$ at $x = \frac{1}{2}$, is equal to:

माना x का एक फलन $y = y(x)$, जो $y\sqrt{1-x^2} = k - x\sqrt{1-y^2}$ को सतुष्ट करता है जहाँ k एक अचर है तथा

$y\left(\frac{1}{2}\right) = -\frac{1}{4}$. तो $x = \frac{1}{2}$ पर $\frac{dy}{dx}$ बराबर है :

(1) $-\frac{\sqrt{5}}{2}$

(2) $\frac{2}{\sqrt{5}}$

(3) $\frac{\sqrt{5}}{2}$

(4) $-\frac{\sqrt{5}}{4}$

Sol. 1

$$x = \frac{1}{2}, y = -\frac{1}{4} \Rightarrow xy = -\frac{1}{8}$$

$$y \cdot \frac{1 \cdot (2x)}{2\sqrt{1-x^2}} + y' \cdot \sqrt{1-x^2} = - \left\{ 1 \cdot \sqrt{1-y^2} + \frac{x \cdot (-2y)}{2\sqrt{1-y^2}} y' \right\}$$

$$-\frac{xy}{\sqrt{1-x^2}} + y' \sqrt{1-x^2} = -\sqrt{1-y^2} + \frac{xy \cdot y'}{\sqrt{1-y^2}}$$

$$y' \left(\sqrt{1-x^2} - \frac{xy}{\sqrt{1-y^2}} \right) = \frac{xy}{\sqrt{1-x^2}} - \sqrt{1-y^2}$$

$$y' \left(\frac{\sqrt{3}}{2} + \frac{1}{8 \cdot \frac{\sqrt{15}}{4}} \right) = \frac{-1}{8 \cdot \frac{\sqrt{3}}{2}} - \frac{\sqrt{15}}{4}$$

$$y' \left(\frac{\sqrt{45} + 1}{2\sqrt{15}} \right) = -\frac{(1 + \sqrt{45})}{4\sqrt{3}}$$

$$y' = -\frac{\sqrt{5}}{2}$$

**Increase Your Score
for JEE Main April'2020**

उत्कर्ष
15 JAN 2020

percentile between 97.0 to 98.99
in JEE Main (Jan-2020)

Fees - ₹ 22000 Including GST

उन्नति
17 JAN 2020

Below 97 percentile in JEE Main (Jan-2020)

Tenure: 62 Days | Schedule: 5 Classes Per Day

Fees - ₹ 27500 Including GST

उत्थान
17 JAN 2020

99 percentile and above
in JEE Main (Jan-2020)

Fees - ₹ 11000
score 160-200

Fees - ₹ 5500
score 200-240

Fees - ₹ 0
score above 240

18. If θ_1 and θ_2 be respectively the smallest and the largest values of θ in $(0, 2\pi) - \{\pi\}$ which satisfy

the equation, $2\cot^2\theta - \frac{5}{\sin\theta} + 4 = 0$, then $\int_{\theta_1}^{\theta_2} \cos^2 3\theta d\theta$ is equal to:

$(0, 2\pi) - \{\pi\}$ में समीकरण $2\cot^2\theta - \frac{5}{\sin\theta} + 4 = 0$ को सन्तुष्ट करने वाले θ के न्यूनतम तथा अधिकतम मान क्रमशः θ_1 तथा

θ_2 हैं, तो $\int_{\theta_1}^{\theta_2} \cos^2 3\theta d\theta$ बराबर है :

- (1) $\frac{\pi}{3}$ (2) $\frac{\pi}{3} + \frac{1}{6}$ (3) $\frac{2\pi}{3}$ (4) $\frac{\pi}{9}$

Sol. 1

$$2\cot^2\theta - \frac{5}{\sin\theta} + 4 = 0$$

$$\frac{2\cos^2\theta}{\sin^2\theta} - \frac{5}{\sin\theta} + 4 = 0$$

$$2\cos^2\theta - 5\sin\theta + 4\sin^2\theta = 0, \sin\theta \neq 0$$

$$2\sin^2\theta - 5\sin\theta + 2 = 0$$

$$(2\sin\theta - 1)(\sin\theta - 2) = 0$$

$$\sin\theta = \frac{1}{2}$$

$$\theta = \frac{\pi}{6}, \frac{5\pi}{6}$$

$$\therefore \int_{\frac{\pi}{6}}^{\frac{5\pi}{6}} \cos^2 3\theta d\theta = \int_{\frac{\pi}{6}}^{\frac{5\pi}{6}} \frac{1 + \cos 6\theta}{2} d\theta$$

$$= \frac{1}{2} \left[\theta + \frac{\sin 6\theta}{6} \right]_{\frac{\pi}{6}}^{\frac{5\pi}{6}} = \frac{1}{2} \left[\frac{5\pi}{6} - \frac{\pi}{6} + \frac{1}{6}(0 - 0) \right] = \frac{1}{2} \cdot \frac{4\pi}{6} = \frac{\pi}{3}$$

19. If $\frac{3 + i\sin\theta}{4 - i\cos\theta}$, $\theta \in [0, 2\theta]$, is a real number, then an argument of $\sin\theta + i\cos\theta$ is:

यदि $\frac{3 + i\sin\theta}{4 - i\cos\theta}$, $\theta \in [0, 2\theta]$, एक वास्तविक संख्या है, तो $\sin\theta + i\cos\theta$ का एक कोणांक (argument) है :

- (1) $-\tan^{-1} \left(\frac{3}{4} \right)$ (2) $\pi - \tan^{-1} \left(\frac{4}{3} \right)$ (3) $\pi - \tan^{-1} \left(\frac{3}{4} \right)$ (4) $\tan^{-1} \left(\frac{4}{3} \right)$

Sol. 2

$$z = \frac{(3 + i\sin\theta)}{(4 - i\cos\theta)} \times \frac{(4 + i\cos\theta)}{4 + i\cos\theta}$$

$$\text{as } z \text{ is purely real} \Rightarrow 3 \cos \theta + 4 \sin \theta = 0 \Rightarrow \tan \theta = -\frac{3}{4}$$

$$\arg(\sin \theta + i \cos \theta) = \pi + \tan^{-1} \left(\frac{\cos \theta}{\sin \theta} \right) = \theta + \tan^{-1} \left(-\frac{4}{3} \right) = \pi - \tan^{-1} \left(\frac{4}{3} \right)$$

20. Let $f(x)$ be a polynomial of degree 5 such that $x = \pm 1$ are its critical points. If $\lim_{x \rightarrow 0} \left(2 + \frac{f(x)}{x^3} \right) = 4$,

then which one of the following is not true?

- (1) $x = 1$ is a point of minima and $x = -1$ is a point of maxima of f .
- (2) $x = 1$ is a point of maxima and $x = -1$ is a point of minimum of f .
- (3) $f(1) - 4f(-1) = 4$.
- (4) f is an odd function.

माना 5 घात के एक बहुपद $f(x)$ के क्रांतिक बिन्दु $x = \pm 1$ है। यदि $\lim_{x \rightarrow 0} \left(2 + \frac{f(x)}{x^3} \right) = 4$ है, तो निम्न में से कौन सा एक सत्य नहीं है ?

- (1) f का एक उच्चिष्ठ बिन्दु $x = 1$ है तथा एक निम्ननिष्ठ बिन्दु $x = -1$ है।
- (2) f का एक निम्ननिष्ठ बिन्दु $x = 1$ है तथा एक उच्चिष्ठ बिन्दु $x = -1$ है।
- (3) $f(1) - 4f(-1) = 4$.
- (4) f एक विषम फलन है।

Sol. 1

$$f(x) = ax^5 + bx^4 + cx^3$$

$$\lim_{x \rightarrow 0} \left(2 + \frac{ax^5 + bx^4 + cx^3}{x^3} \right) = 4 \Rightarrow 2 + c = 4 \Rightarrow c = 2$$

$$f'(x) = 5ax^4 + 4bx^3 + 6x^2$$

$$= x^2 (5ax^2 + 4bx + 6)$$

$$f'(1) = 0 \Rightarrow 5a + 4b + 6 = 0$$

$$f'(-1) = 0 \Rightarrow 5a - 4b + 6 = 0$$

$$b = 0$$

$$a = -\frac{6}{5}$$

$$f(x) = -\frac{6}{5}x^5 + 2x^3$$

$$f'(x) = -6x^4 + 6x^2$$

$$= 6x^2(-x^2 + 1)$$

$$= -6x^2(x+1)(x-1)$$

$$\frac{-1}{1-} + \frac{1-}{1}$$

minimal at $x = -1$

maxima at $x = 1$

**Increase Your Score
for JEE Main April'2020**

उत्कर्ष
15 JAN 2020

percentile between 97.0 to 98.99
in JEE Main (Jan-2020)

Fees - ₹ 22000 Including GST

उन्नति
17 JAN 2020

Below 97 percentile in JEE Main (Jan-2020)

Tenure: 62 Days | Schedule: 5 Classes Per Day

Fees - ₹ 27500 Including GST

उत्थान
17 JAN 2020

99 percentile and above
in JEE Main (Jan-2020)

Fees - ₹ 11000
score 160-200

Fees - ₹ 5500
score 200-240

Fees - ₹ 0
score above 240

- 21.** Let $X = \{n \in \mathbb{N} : 1 \leq n \leq 50\}$. If $A = \{n \in X : n \text{ is a multiple of } 2\}$ and $B = \{n \in X : n \text{ is a multiple of } 7\}$, then the number of elements in the smallest subset of X containing both A and B is _____.
- माना $X = \{n \in \mathbb{N} : 1 \leq n \leq 50\}$. यदि $A = \{n \in X : n, 2 \text{ का एक गुणज है}\}$ तथा $B = \{n \in X : n, 7 \text{ का एक गुणज है}\}$, तो X के सबसे छोटे उपसमुच्चय, जिसमें A तथा B दोनों हैं, में अवयवों की संख्या है _____.

Sol. 29

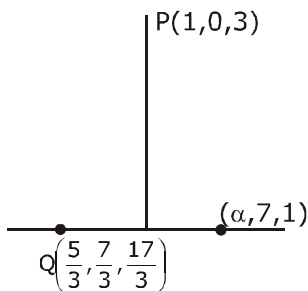
$$n(A \cup B) = n(A) + n(B) - n(A \cap B) \\ = 25 + 7 - 3 = 29$$

- 22.** If the foot of the perpendicular drawn from the point $(1, 0, 3)$ on a line passing through $(\alpha, 7, 1)$ is $\left(\frac{5}{3}, \frac{7}{3}, \frac{17}{3}\right)$, then α is equal to _____.

यदि $(\alpha, 7, 1)$ से जाने वाली एक रेखा पर बिन्दु $(1, 0, 3)$ से डाले गये लम्ब का पाद $\left(\frac{5}{3}, \frac{7}{3}, \frac{17}{3}\right)$ है, तो α बराबर है _____.

Sol. 4

Since PQ is perpendicular to L , therefore



$$\left(1 - \frac{5}{3}\right)\left(\alpha - \frac{5}{3}\right) + \left(\frac{-7}{3}\right)\left(7 - \frac{7}{3}\right) + \left(3 - \frac{17}{3}\right)\left(1 - \frac{17}{3}\right) = 0$$

$$\Rightarrow \frac{-2\alpha}{3} + \frac{10}{9} - \frac{98}{9} + \frac{112}{9} = 0$$

$$\Rightarrow \frac{2\alpha}{3} = \frac{24}{9} \Rightarrow \alpha = 4$$

- 23.** If the system of linear equations,
 $x + y + z = 6$
 $x + 2y + 3z = 10$
 $3x + 2y + \lambda z = \mu$
 has more than two solutions, then $\mu - \lambda^2$ is equal to _____.
- यदि रैखिक समीकरण निकाय
 $x + y + z = 6$
 $x + 2y + 3z = 10$
 $3x + 2y + \lambda z = \mu$
 के दो से अधिक हल हैं, तो $\mu - \lambda^2$ बराबर है _____.

24000+
SELECTIONS SINCE 2007

JEE (Advanced)	JEE (Main)	NEET / AIIMS	NTSE / OLYMPIADS
5392	16241	1305	1158
(Under 50000 Rank)	(since 2016)	(5th to 10th class)	

H.O. : 394, Rajeev Gandhi Nagar, Kota
Toll Free : 1800-212-1799
www.motion.ac.in | info@motion.ac.in

sol. 13

$$\begin{aligned} x + y + z &= 6 && \dots(1) \\ x + 2y + 3z &= 10 && \dots(2) \\ 3x + 2y + \lambda z &= \mu && \dots(3) \end{aligned}$$

from (1) and (2)
if $z = 0 \Rightarrow x + y = 6$ and $x + 2y = 10$
 $\Rightarrow y = 4, x = 2$
(2,4,0)
if $y = 0 \Rightarrow x + z = 6$ and $x + 3z = 10$
 $\Rightarrow z = 2$ and $x = 4$
(4,0,2)
So, $3x + 2y + \lambda z = \mu$
must pass through (2,4,0) and (4,0,2)
so $6 + 8 = \mu \Rightarrow \mu = 14$
and $12 + 2\lambda = \mu$
 $12 + 2\lambda = 14 \Rightarrow \lambda = 1$
so $\mu - \lambda^2 = 14 - 1$
 $= 13$

24. If the mean and variance of eight numbers 3, 7, 9, 12, 13, 20, x and y be 10 and 25 respectively, then x.y is equal to _____.

यदि आठ संख्याओं 3, 7, 9, 12, 13, 20, x तथा y के माध्य तथा प्रसरण क्रमशः 10 तथा 25 हैं, तो xy बराबर है _____.

sol. 52

$$\text{mean} = \bar{x} = \frac{3+7+9+12+13+20+x+y}{8} = 10 \Rightarrow x + y = 16 \quad \dots(i)$$

$$\text{variance } \sigma^2 = \frac{\sum(x_i)^2}{8} - (\bar{x})^2 = 25$$

$$\frac{9 + 49 + 81 + 144 + 169 + 400 + x^2 + y^2}{8} - 100 = 25$$

$$\Rightarrow x^2 + y^2 = 148 \quad \dots(ii)$$

$$(x+y)^2 = (16)^2 \Rightarrow x^2 + y^2 + 2xy = 256 \Rightarrow xy = 52$$

25. If the function f defined on $\left(-\frac{1}{3}, \frac{1}{3}\right)$ by $f(x) = \begin{cases} \frac{1}{x} \log_e \left(\frac{1+3x}{1-2x}\right), & \text{when } x \neq 0 \\ k & \text{when } x = 0 \end{cases}$ is continuous, then

k is equal to _____.

यदि $\left(-\frac{1}{3}, \frac{1}{3}\right)$ में $f(x) = \begin{cases} \frac{1}{x} \log_e \left(\frac{1+3x}{1-2x}\right), & \text{when } x \neq 0 \\ k & \text{when } x = 0 \end{cases}$ द्वारा परिभाषित फलन, f संतत है, तो k बराबर है _____।

Sol. 5

**Increase Your Score
for JEE Main April'2020**

उत्कर्ष
15 JAN 2020

percentile between 97.0 to 98.99
in JEE Main (Jan-2020)

Fees - ₹ 22000 Including GST

उन्नति
17 JAN 2020

Below 97 percentile in JEE Main (Jan-2020)

Tenure: 62 Days | Schedule: 5 Classes Per Day

Fees - ₹ 27500 Including GST

उत्थान
17 JAN 2020

99 percentile and above
in JEE Main (Jan-2020)

Fees - ₹ 11000
score 160-200

Fees - ₹ 5500
score 200-240

Fees - ₹ 0
score above 240

$$\lim_{x \rightarrow 0} f(x) \lim_{x \rightarrow 0} \left(\frac{1}{x} \ln \left(\frac{1+3x}{1-2x} \right) \right) = \lim_{x \rightarrow 0} \left(\frac{\ln(1+3x)}{x} - \frac{\ln(1-2x)}{x} \right)$$
$$= \lim_{x \rightarrow 0} \left(\frac{3\ln(1+3x)}{3x} - \frac{2\ln(1-2x)}{-2x} \right) = 3 + 2 = 5$$

∴ f(x) will be continuous. if $f(0) = \lim_{x \rightarrow 0} f(x)$

24000+
SELECTIONS SINCE 2007

JEE (Advanced)	JEE (Main)	NEET / AIIMS	NTSE / OLYMPIADS
5392	16241	1305	1158
(Under 50000 Rank)	(since 2016)	(5th to 10th class)	

H.O. : 394, Rajeev Gandhi Nagar, Kota
Toll Free : 1800-212-1799
www.motion.ac.in | ✉: info@motion.ac.in

कर लो अब पूरी तैयारी

चूक ना जाये इस बारी

INCREASE YOUR SCORE for JEE Main April 2020

उत्थान 17th JAN 2020

99 percentile and above
in JEE Main (Jan-2020)

उत्कर्ष 15th JAN 2020

percentile between 97.0 to 98.99
in JEE Main (Jan-2020)

उन्नति 17th JAN 2020

Below 97 percentile
in JEE Main (Jan-2020)

MOTIONTM

Nurturing potential through education

Toll Free : 1800-212-1799